

DISTINCTION UPPER PRIMARY ASSESSMENT

MONITORING LEARNER'S PROGRESS



GRADE 5 - 2021

5

SOCIAL STUDIES AND RELIGIOUS EDUCATION

SECTION A, B AND C

Learner's Name: SCHOOL

INSTRUCTIONS

- a) This paper consists of **12** three sections: SST, CRE & IRE.
- b) Answer all the questions in **Section A** and either **Section B** or **C**.

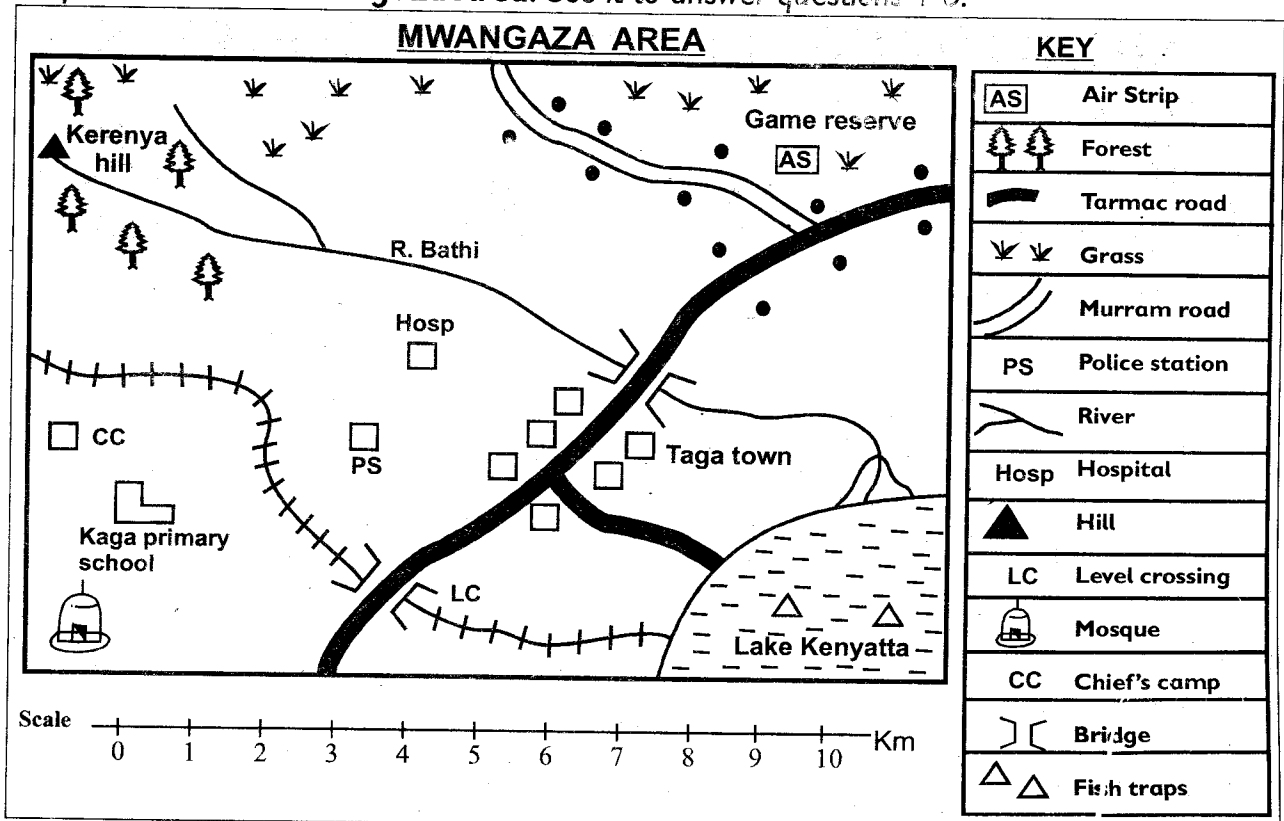
SECTION A	SOCIAL STUDIES	Total score
Questions	1 - 25	40
Scores		
Learner's score		

SECTION B	CRE	TOTAL SCORE
Questions	1 - 14	15
Scores		
Learner's score		

SECTION C	IRE	TOTAL SCORE
Questions	1 - 15	15
Scores		
Learner's score		

SECTION A: SOCIAL STUDIES




The map below shows Mwangaza Area. Use it to answer questions 1-6.



- Describe population distribution in Mwangaza area? (1 mark)
- Which is the major means of transport? _____ (1 mark)
- Name two natural resources found in the area? _____ (2 marks)
- Where is the location of the game reserve? _____ (1 mark)
- Where do the people from Mwangaza get water? _____ (2 marks)
- State one common historical building in Kenya? (2 marks)
- Name three animals kept for dairy farming in Kenya (3marks)
a) _____ b) _____ c) _____
- What is subsistence farming? _____ (2 marks)
- State two main economic activities in Kenya. (2 marks)
a) _____ b) _____
- Which of the following statements best describes a language group? (1 mark)
A group of similar languages, one popular group, a political party

11. Describe the settlement of people living in the dry areas of Kenya? _____
(2 marks)
12. Name the county that is on the southern part of the country and its near the Indian Ocean? _____ (1 mark)
13. Who taught girls in the traditional community on how to perform their roles?
_____ (1 mark)
14. Who is the most senior administrative leader in the school? (2 marks)

15. In a school who elects school student leaders? _____ (1 mark)
16. The following are types of resources except? (Beddings, land, water) (1 mark)

17. State ways of caring for trees at home? (3 marks)
- _____
 - _____
 - _____
18. A method of keeping livestock in a shed and feeding them there is called? (1 mark)
_____ (paddocking, herding, zero grazing)
19. Which of the following is not an example of Western Bantus? (1 mark)
(Abagusii, Sanye, Abaluhya)
20. State one characteristic of mountain climatic region? _____
_____ (2 marks)
21. The following are elements that make weather except?
(Rainfall, rainbow, cloud cover) _____ (1 mark)
22. What is the difference between a mountain and a hill? _____
_____ (2 marks)
23. State two elements of a map (2 marks)
- _____
 - _____
24. Name the following artefacts. (3 marks)
- | | | |
|---|---|---|
|  |  |  |
| a) _____ | b) _____ | c) _____ |
25. What is a monument? (2 marks)

Section B

CHRISTIAN RELIGIOUS EDUCATION (15 MARKS)

1. What lesson can young children learn from the parable of the talents?
_____ (1 mark)
2. Which land did God give Adam and Eve? _____ (1 mark)
3. State a form of child labour? _____
4. What caused Adam and Eve to disobey God? _____ (1 mark)
5. How can people live in harmony at home? _____ (1 mark)
6. Being courageous and willing to take risks is called? _____ (1 mark)
7. Which king was wise? _____ (Solomon, David) (1/2 mark)
8. Who among Noah's sons did not show respect to him? _____
9. Name two examples of elderly people in your community? (1 mark)
a) _____ b) _____
10. Who reminded Israelites that God was a true God? _____ (1 mark)
11. State two qualities of a good leader? (2 marks)
a) _____ b) _____
12. Name two types of families? (1 mark)
a) _____ b) _____
13. Which book contains God's teaching on how Christians should live? (1/2 mark)
_____ (Koran, bible, dictionary, atlas)
14. From the story of Daniel in the bible which values can Christians learn from him?
a) _____ b) _____ (2 marks)

SECTION C

ISLAMIC RELIGIOUS EDUCATION (15 MARKS)

1. The word *kauthar* means _____ (1 mark)
 2. Which surah describes the episode of the elephant that wanted to destroy the Kaaba? _____ (1 mark)
 3. Who wanted to destroy the Kaaba. _____ (1 mark)
 4. Complete the hadith "Fear Allah (S.W.T) wherever you are and follow up a bad deed with a good deed, it will wipe out. And behave well towards other _____ (1 mark)
 5. Write any example of good behavior. _____ (1 mark)
 6. Write the response to *Assalam aleikum warahmatullah wabarakatuh* _____ (1 mark)
 7. There are _____ beautiful names of Allah (S.W.T) (1 mark)
 8. *Al-Ghaffaar* means _____ (1 mark)
- Name any two characteristics of the angels of Allah (S.W.T) (2 marks)
9. _____
 10. _____
 11. Angels were created from _____ (1 mark)
 12. Name one *Ulul Azm* prophet. _____ (1 mark)
 13. In which month do Muslims fast? _____ (1 mark)
 14. Who was the first prophet of Allah (S.W.T)? _____ (1 mark)
 15. Which is the first pillar of Iman? _____ (1 mark)