

# MONITORING LEARNERS PROGRESS

SASON  
009

## GRADE 5 - YEAR - 2022 SOCIAL STUDIES AND C.R.E

Name .....

Learner's Number

Gender: Boy

Girl

County Name: .....

County Code:

Sub-county Name: .....

Sub-county code

School Name: .....

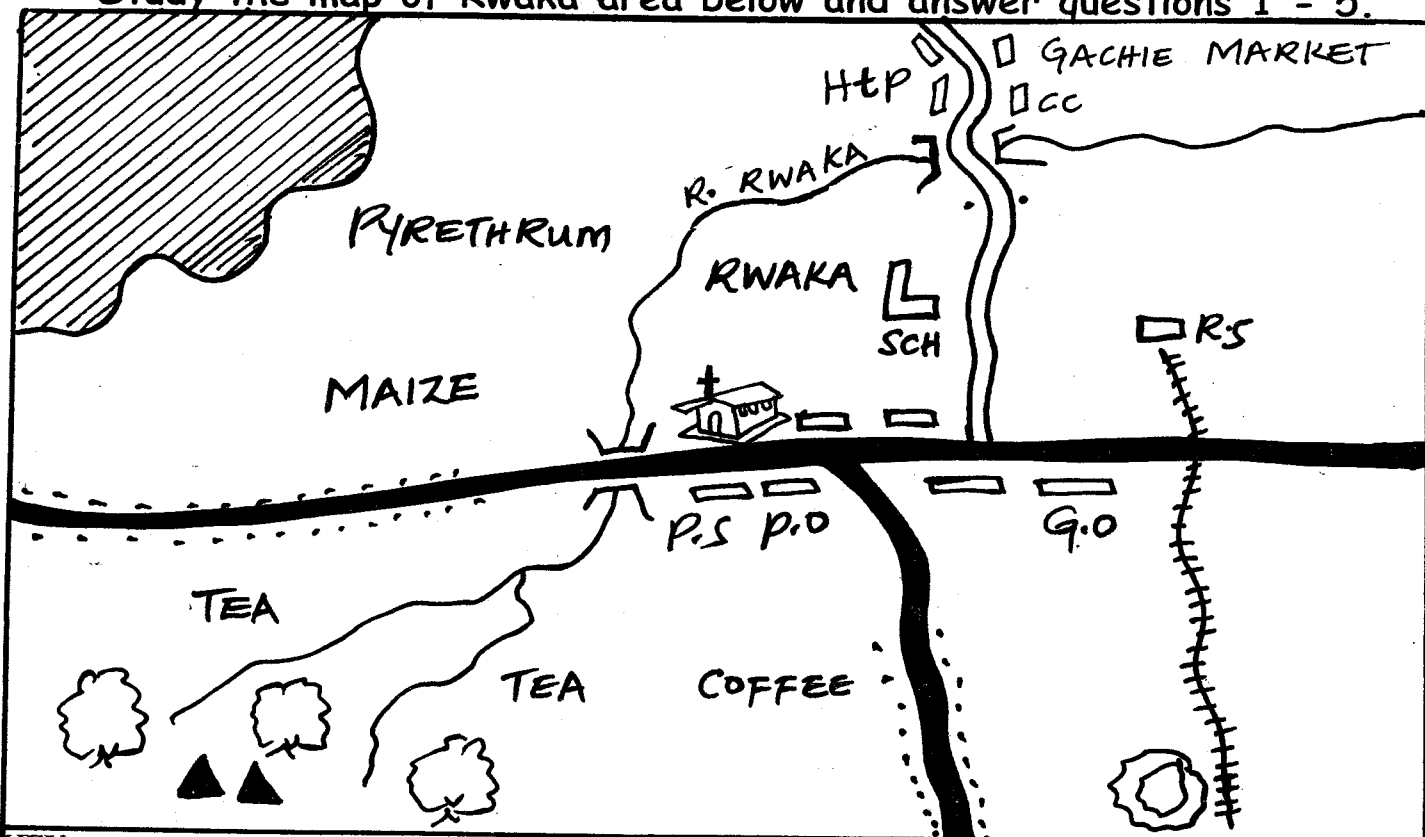
School Code:

### TEACHER'S ASSEMENT RUBRIC.















Exceeds Expectations	Meets Expectations	Approaching Expectations	Below Expectations


# SOCIAL STUDIES.

Study the map of Rwaka area below and answer questions 1 - 5.



KEY:

	Tarmac road		Chief's camp		Church
	Murram road		Buildings		Quarry
	Settlement		School		Bridge
	Forest		Hospital		Post office
	Hills		Police station		

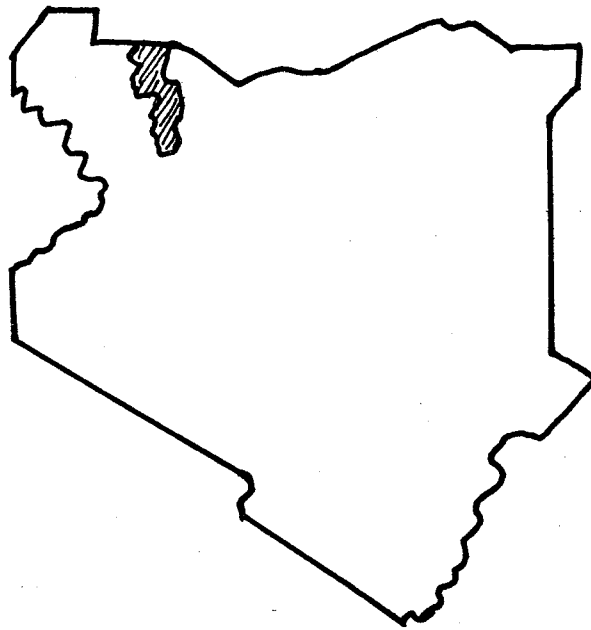
- River Rwaka flows from \_\_\_\_\_ to \_\_\_\_\_ (1mk)
- Symbol  shows that there is \_\_\_\_\_ in Rwaka area. (1km)
- Name two physical features that are found in Rwaka area. (2mks)
  - \_\_\_\_\_
  - \_\_\_\_\_
- People in Rwaka area lives near the \_\_\_\_\_ (1mk)
- State two economic activities practised by the people of Rwaka area.
  - \_\_\_\_\_
  - \_\_\_\_\_ (2mks)
- Name two countries neighbouring Kenya. (2mks)
  - \_\_\_\_\_
  - \_\_\_\_\_
- List two lakes found in Kenya. (2mks)
  - \_\_\_\_\_
  - \_\_\_\_\_

8. Write down one historic built environment in Kenya. (1mk)  
\_\_\_\_\_
9. Identify three language groups in Kenya and give one example in each.
- |    |                |       |
|----|----------------|-------|
| a) | Language group | _____ |
|    | Example        | _____ |
| b) | Language group | _____ |
|    | Example        | _____ |
| c) | Language group | _____ |
|    | Example        | _____ |
- (6mks)
10. What is culture? (1mk)  
\_\_\_\_\_
11. Areas with good climate and fertile soils have \_\_\_\_\_ population. (1mk)
12. The following are duties of a school administrator.
- Prepares and maintains class register.
  - Maintains class discipline.
  - Provide guidance and counselling to pupils.
- The school administrator who performs the above duties is \_\_\_\_\_ (1mk)
13. Match the resources with their economic activity.
- | <u>Resource</u> | <u>Economic activity.</u> |
|-----------------|---------------------------|
| a) Wildlife     | Saw milling               |
| b) Mineral      | Tourism                   |
| c) Forests      | Mining                    |
14. Growing of crops and keeping of animals for home use is known as \_\_\_\_\_
15. Growing of crops in a small piece of land is called \_\_\_\_\_
16. Name the climatic region described below. (2mks)
- It has one rainy season. \_\_\_\_\_
  - Experiences high temperatures. \_\_\_\_\_
17. What is the leading producing area of horticultural products in Kenya? \_\_\_\_\_ (1mk)
18. Give two importances of mining to the Kenyan economy.
- \_\_\_\_\_
  - \_\_\_\_\_
19. Explain the following methods as used in fishing;
- Net drifting. \_\_\_\_\_
  - Use of basket. \_\_\_\_\_

20. Locate the following in the map of Kenya drawn below.

a) Two games parks

b) Two game reserves.



### CHRISTIAN RELIGIOUS EDUCATION.

1. God appeared to Moses on Mt. Sinai in form of \_\_\_\_\_
2. What is a talent? \_\_\_\_\_
3. Which son of Noah showed disrespect to the father? \_\_\_\_\_
4. God helped \_\_\_\_\_ to interpret Pharaoh's dream.  
(Joseph, David)
5. Write two causes of child labour.  
i) \_\_\_\_\_ ii) \_\_\_\_\_
6. How did Adam and Eve show disobedience to God? \_\_\_\_\_  
\_\_\_\_\_
7. What is the main value Christians learn from the story of King Solomon?  
\_\_\_\_\_
8. Write one challenge a family may face when developing unity?  
\_\_\_\_\_

### I.R.E.

1. The father of mankind was \_\_\_\_\_ (Adam, Hawa, Iblis, Man)
2. The first surah to be revealed was \_\_\_\_\_  
(Alaq, Fatiha, Asr, Ikhlas)
3. The angel who takes souls of people to death is \_\_\_\_\_  
(Jibreel, Israeel, Malik)
4. When eating we should use the \_\_\_\_\_  
(left hand, right hand, two hands)
5. Which one of the following is not an Angel? \_\_\_\_\_  
(Joel, Munkar, Atid, Jibrel)