

# COMPETENCE BASED CURRICULUM

SASON  
001

## GRADE 3 - YEAR - 2023

### MATHEMATICS ACTIVITIES.

Name .....

Learner's Number

--	--	--

Gender: Boy

Girl

County Name: .....

County Code:

--	--	--

Sub-county Name: .....

Sub-county code

--	--	--

School Name: .....

School Code:

--	--	--

### TEACHER'S ASSEMENT RUBRIC.

The grid below is to be filled by the teacher after marking the learner's work.

Number of questions	
Number of correct questions	
Performance level	

Fill in the missing numbers.

1. 9, 12, 15, \_\_\_\_\_
2. 32, \_\_\_\_\_, 36, 38, 40
3. 10, 15, 20, \_\_\_\_\_, 30

Work out;

4. 
$$\begin{array}{r} 17 \\ + 4 \\ \hline \end{array}$$

5. 
$$\begin{array}{r} 93 \\ + 6 \\ \hline \end{array}$$

6. 
$$\begin{array}{r} 642 \\ + 53 \\ \hline \end{array}$$

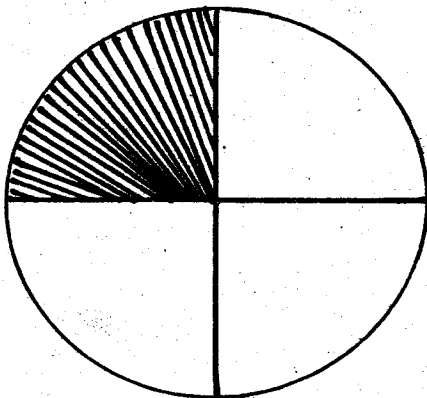
7. 
$$\begin{array}{r} 80 \\ + 20 \\ \hline \end{array}$$

8.  $\square - 4 = 6$

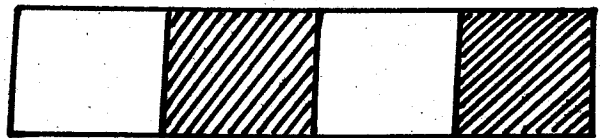
9.  $10 + \square = 20$

What fraction is shaded?

10.



11.



\_\_\_\_\_


\_\_\_\_\_

Divide.

2.  $9 \div 3 = \underline{\hspace{2cm}}$
3. Share 15 mangoes among 5 children each will get \_\_\_\_\_ mangoes.

Multiply.

14.



\_\_\_\_\_ × \_\_\_\_\_ = \_\_\_\_\_

15.

5 × 3 = \_\_\_\_\_

16.

In a box, there are 10 books. How many books are there in such 3 boxes? \_\_\_\_\_



17.

Joyce made 30 chapatis. She sold 10 chapati. How many chapati did she remain with? \_\_\_\_\_

Measurement.

18.

Which holds more water?



Write "heavier than" or "lighter than".

19.

A book is \_\_\_\_\_ a pencil.

20.

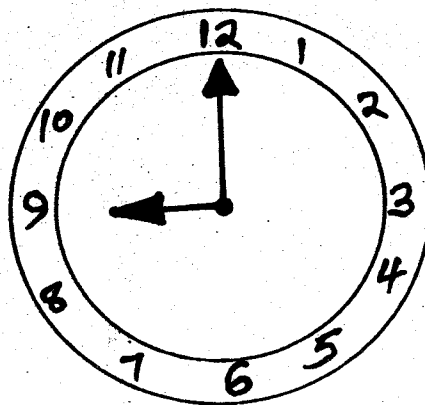
An apple is \_\_\_\_\_ a pumpkin.

21.

2 weeks has \_\_\_\_\_ days.

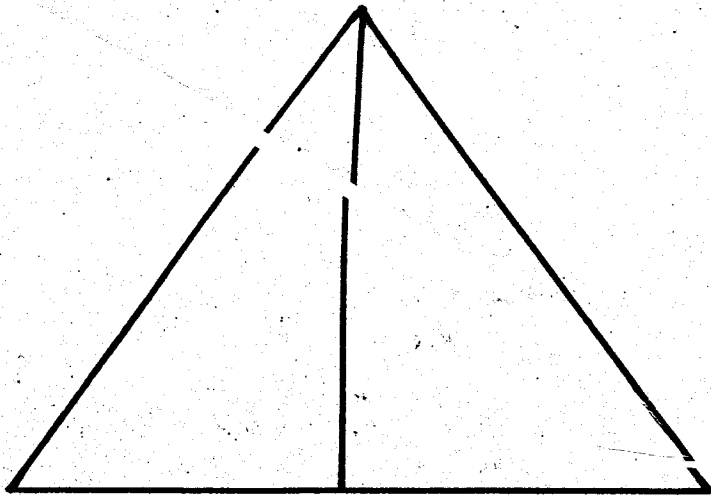
22.

What is the time? \_\_\_\_\_



Geometry.

23. How many triangles can you see? \_\_\_\_\_



24. Draw a curved line.

25. Complete the pattern.

