

# COMPETENCY BASED CURRICULUM

SASON  
004

## GRADE 1 - YEAR 2021

### MATHEMATICAL ACTIVITIES

Name: \_\_\_\_\_

Learner's Number:

Gender: Boy

Girl

County Name: \_\_\_\_\_ County code

Sub-county Name: \_\_\_\_\_ Sub-county code


School Name: \_\_\_\_\_ School code

**The grid below is to be filled by the teacher  
after marking the learner's work.**

Number of questions	20
Number of correct questions	
Performance level	


1. Write how many. (1 mk)

(a)



\_\_\_\_\_ (1 mk)

(b)



\_\_\_\_\_ (1 mk)

2. Fill in the missing numbers.

(a) 1, 2, \_\_\_\_\_, \_\_\_\_\_, 5, 6 (1mk)

(b) 20, 30, \_\_\_\_\_, \_\_\_\_\_, 60 (1 mk)

3. Match the numbers with words.

(a) 3                      eight (1 mk)

(b) 5                      three(1mk)

(c) 8                      five (1 mk)

4. Add the following numbers.

(a)  $3 + 2 = \square$  (1 mk)

(b)  $1 + 8 = \square$  (1 mk)

(c)  $7 + 2 = \square$  (1 mk)

5. Which one is bigger **22** or **32**? (1 mk)

\_\_\_\_\_

6. Take away.


(a)  $7 - 5 = \square$  (1 mk)

(b)  $6 - 3 = \square$  (1 mk)


(c)  $10 - 2 = \square$  (1 mk)

7. One week has \_\_\_\_\_ days. (1 mk)

8. Draw a ball.(1 mk)





9. Which pencil is shorter?



\_\_\_\_\_ (1 mk)

10. A hen has \_\_\_\_\_ legs. (1 mk)

11.



The jug holds \_\_\_\_\_ water than the cup. (1 mk)

**Assessment Rubric**

Level	4	3	2	1
Score	19 - 20	13 - 18	7 - 12	0 - 6