

# MONITORING LEARNERS PROGRESS

## GRADE 4 - YEAR: 2021

S A S O N  
0 0 2

### MATHEMATICS

Time: 1 Hr 40 Min.

1. What is 4876 in words? \_\_\_\_\_  
\_\_\_\_\_ (1 mark)

2. Arrange the following numbers from the largest to the smallest.  
513, 215, 365, 187 \_\_\_\_\_ (1 mark)

3. What is the next number in the pattern;  
6, 12, 18, 24, \_\_\_\_\_ ? (1 mark)

4. Which of the following is an odd number;  
22, 20, 17, 8? \_\_\_\_\_ (1 mark)

5. Work out: \_\_\_\_\_ (1 mark)

$$\begin{array}{r} 165 \\ + 83 \\ \hline \\ \hline \end{array}$$

6. Jack had 612 hens. He bought 320 more hens. How many hens did he have in total? \_\_\_\_\_ (1 mark)

7. Round off 936 to the nearest ten. \_\_\_\_\_ (1 mark)

8. Work out: \_\_\_\_\_ (1 mark)

$$12 \times 6 = \underline{\hspace{2cm}}$$

9. What is the place value of digit 5 in 65983? \_\_\_\_\_ (1 mark)

10. Work out: \_\_\_\_\_ (1 mark)

$$536 - 210 = \underline{\hspace{2cm}}$$

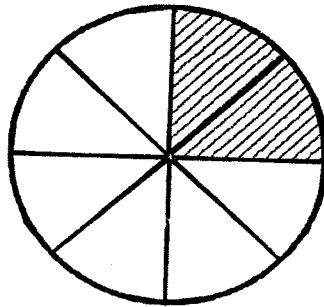
11. Divide

$$5 \overline{) 75}$$

(1 mark)

12. Mercy had 9 hens. He sold each hen at Sh. 65. How much money did he get? (1 mark)

13. What is the fraction of the shaded part? (1 mark)



14. What is the place value of digit 8 in 4.68? (1 mark)

15. A family uses 8 litres of milk everyday. How many litres of milk does the family use in one week? (1 mark)

16. Work out: (1 mark)

$$\begin{array}{r} 958 \\ - 326 \\ \hline \\ \hline \end{array}$$

17. In a certain school there are 729 learners. If there are 387 boys, how many girls are there? (1 mark)

18. Add: (1 mark)

$$\begin{array}{r} 4651 \\ + 2738 \\ \hline \\ \hline \end{array}$$

19. There are 3642 boys and 4328 girls in a certain village. How many children are in the village? (1 mark)

20. Work out:

$$7 \overline{) 53}$$

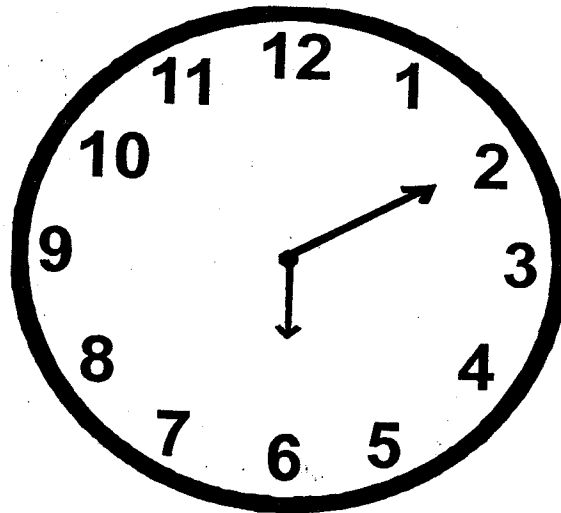
(1 mark)

21. Multiply:

$$9 \times 8 = \underline{\hspace{2cm}}$$

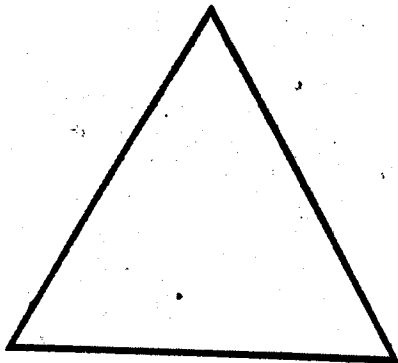
(1 mark)

22. What is the time in the clock face below? (1 mark)



23. How many 50 shillings notes are there in a Sh. 500 note? (1 mark)

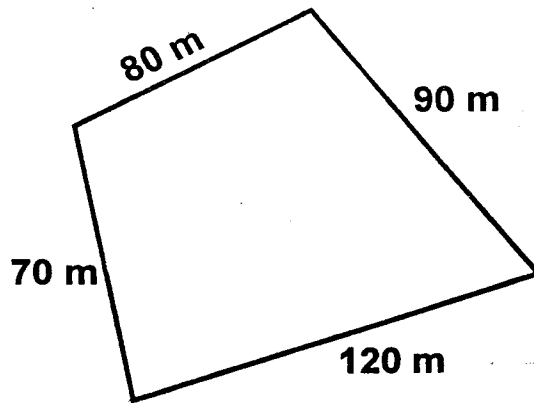
24. This is a



(1 mark)

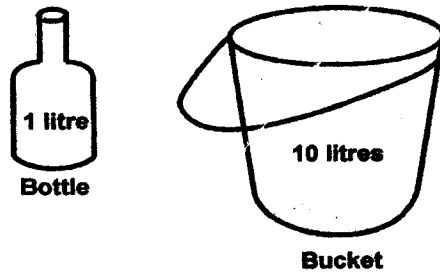
25. What is the distance round the figure below?

(1 mark)



26. How many bottles will fill the bucket?

(1 mark)



27. Otieno has a mass of 36 kg while Kariuki has a mass of 48 kg. Who is heavier?

(1 mark)

28. How many months are there in 5 years?

(1 mark)

29. John has Sh. 200 note. He bought a book at Sh. 150. How much money did he save?

(1 mark)

30. Draw the next shape in the pattern.

(1 mark)



### Assessment Rubrics - Mathematics

Level	4	3	2	1
Score	28 - 30	19 - 27	10 - 18	0 - 9