


# COMPETENCE BASED CURRICULUM

## GRADE 1 YEAR 2021

### INTERGRATED ACTIVITIES

{1}



NAME.....

LEARNER'S NUMBER

GENDER: BOY  GIRL

SCHOOL NAME: .....

#### Instructions to learners

1. Answer all questions correctly

**FOR OFFICIAL USE ONLY**

### **TEACHER'S SCORING GUIDE**

#### **SECTION A**

#### **ASSESSMENT RUBRICS**


The grid below is to be filled by the teacher after marking the learner's work.

Learning area	Exceeding expectations	Meeting expectations	Approaching expectations	Below expectations
HYG+NUTR ACT				
Environmental				
CRE Activity				
Movemental				


# HYGIENE AND NUTRITION ACTIVITY

(15Marks)


1. \_\_\_\_\_ is a healthy habit. (1mk)  
**(Eating sugary foods, Washing hands)**
2. Write one activity that makes our teeth strong \_\_\_\_\_ (1mk)
3. Dirty toilets smell \_\_\_\_\_ (1mk)
4. A pumice stone is used to clean our \_\_\_\_\_ (1mk)
5. Draw the following things. (3mks)



Pumice stone





Chewed stick



Toothbrush

6. After using a toilet, we should \_\_\_\_\_ it. (1mk)  
**(cry, knock, flush)**
7. Draw two foods that bad for our teeth. (2mks)



8. Name two senses that we can use to know food. (2mk)  
(a) \_\_\_\_\_ (b) \_\_\_\_\_
9. Name two types of food that we get from animals. (2mk)  
(a) \_\_\_\_\_ (b) \_\_\_\_\_


10. Fruits should be \_\_\_\_\_ before eating. (1mk)

## ENVIRONMENTAL ACTIVITIES



(15marks)

11. Name two uses of water at home. (2mk)  
(a) \_\_\_\_\_ (b) \_\_\_\_\_

12. Name the weather below. (3mks)



13. Draw and name two fruits that you know. (2mks)

(a)  (b) 

14. Animals kept at home are called \_\_\_\_\_ animals. (1mk)

15. We get honey from a \_\_\_\_\_ (1mk)

16. Utensils are used in the \_\_\_\_\_ (1mk)  
(bathroom, kitchen, sitting room)

17. Loud sounds can spoil our \_\_\_\_\_ (1mk)

18. Name any two child's right. (2mks)

(a) \_\_\_\_\_

(b) \_\_\_\_\_

19. Name two utensils found at home. (2mks)

(a) \_\_\_\_\_

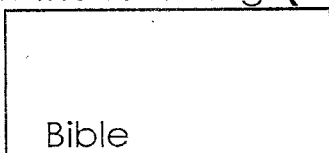

(b) \_\_\_\_\_

**C.R.E (10marks)**

20. Jesus was born in \_\_\_\_\_ (1mk)

21. Jesus was laid on a \_\_\_\_\_ (bed, manger) (1mk)



22. Draw the following. (2mks)

(a)  (b) 

23. When given something, I should say \_\_\_\_\_ (1mk)

24. \_\_\_\_\_ created everything. (1mk)

25. Draw, name and colour two items you share at school. (2mks)

(a)  (b) 

26. Prophet \_\_\_\_\_ was carried by a chariot of fire to heaven. (1mk)

27. The \_\_\_\_\_ were the first people to see baby Jesus. (1mk)  
(wisemen, shepherds, pastors)

**ISLAMIC RELIGIOUS ACTIVITIES**

**Write names of any five prophets of Alla (S.W.T)**


29. \_\_\_\_\_ 2. \_\_\_\_\_  
30. \_\_\_\_\_ 4. \_\_\_\_\_  
31. \_\_\_\_\_  
32. Muslim call their God \_\_\_\_\_ ( Allah Jehova)  
33. We get \_\_\_\_\_ from the sun.  
34. The first surah in the Qur'an is \_\_\_\_\_  
35. Sh \_\_\_\_\_ da  
36. Sw \_\_\_\_\_ t

**MOVEMENT, CREATIVE ACTIVITIES, ART AND CRAFT**

**(10MKS)**

**ART AND CRAFT**


37. Draw and colour a single stranded bracelet. **(2mks)**



**MUSIC**

38.  This is a \_\_\_\_\_ **(drum, shaker) (1mk)**

39. Draw a drum. **(2marks)**



40. A drum is played by \_\_\_\_\_ **(shaking, hitting) (1mk)**

**MOVEMENT**

41. Name two parts of the body that are involved while stretching. **(2mks)**

(a) \_\_\_\_\_ (b) \_\_\_\_\_

42. Draw and name two things you can use to play in school. **(2mks)**

