

SIGNAL EARLY YEARS' ASSESSMENT

SIGNAL.007

MONITORING LEARNER'S PROGRESS Grade 3 - 2021 INTEGRATED LEARNING AREAS

Name.....

Learner's Number

Gender: Boy Girl

County Name..... County Code

Sub- County Name..... Sub- County Code

School Name..... School Code

TEACHER'S SCORING GUIDE


ASSESSMENT RUBRICS

Exceeds Expectations	Meets Expectations	Approaches Expectations	Below Expectations

The grid below is to be filled by the teacher after marking the learner's work.

Learning Areas	Environmental Activities	Hygiene and Nutrition Activities	Religious Activities	
			CRE	IRE
No. of questions	11	7	9	10
No. of questions correct				
Performance level				

ENVIRONMENTAL ACTIVITIES

1. Name two unfavourable weather conditions.(2 marks)
(a) _____
(b) _____
2. A lot of rainfall can cause _____.
(1 mark)
3. We make water safe for drinking by _____.(2 marks)
4. _____ is caused by lack of rain for a long period.
(floods, drought)(1 mark)
5. Dirty water causes _____.
(health, illness) (1 mark)
6. We boil water to _____.
(kill germs, warm) (1 mark)
7. The best soil for farming is _____.
(loam, sand).(2 marks)
8. _____ soil has a rough texture.
(1 mark)
9. Draw and colour a sisal plant.
(3 marks)

10. Match the soil with the texture. (3 marks)
(a) Sand Fine
(b) Loam Coarse
(c) Clay Medium
11. Fill in the missing letters to show ways of making water clean.
(3 marks)
(a) Decant ____ t ____ on.
(b) F ____ l t ____ ring.
(d) B ____ i l ____ ng.

HYGIENE AND NUTRITION ACTIVITIES


1. Name three forms of kitchen garden. (3 marks)

- (a) _____
- (b) _____
- (c) _____

2. Tick ways in which water can be contaminated and cross the wrong ones. (4 marks)

- (a) Washing clothes near rivers.
- (b) Filtering the water.
- (c) Watering animals directly from a source.
- (d) Boiling water.

3. Draw a tooth. (1 marks)



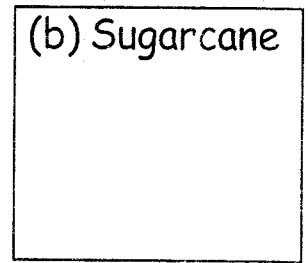
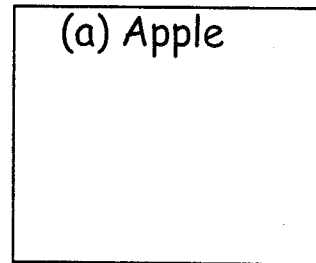
4. Name four materials for cleaning the classroom. (4 marks)

- (a) _____
- (b) _____
- (c) _____
- (d) _____

5. Write true or false. (3 marks)


- (a) Carrots are dangerous to our health. _____
- (b) We should brush our teeth twice a week. _____
- (c) Clean mouth has good smell. _____

6. Draw the following healthy foods. (2 marks)




7. Draw the following forms of medicines. (3 marks)


(a) tablets



(b) Syrup

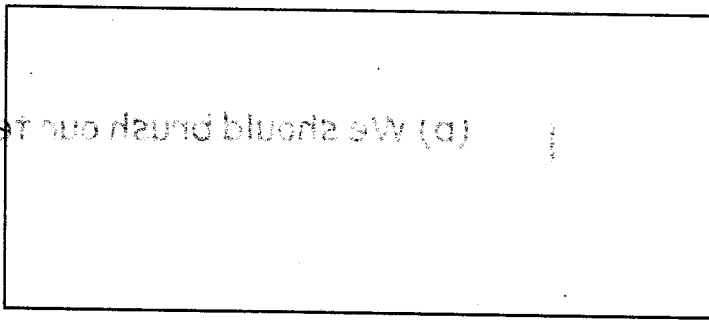


(d) Cream



CRE ACTIVITIES(10 marks)

1. Who is the head of the family? _____ (1mark)
2. Draw a sad face. (2 marks)



3. We should make _____ choices. (right, wrong)(1mark)
4. The Bible is the _____ of God. (word, special).(1 mark)
5. Name two gospel books. _____, _____ (2 mark)
6. _____ saw a burning bush.(3 marks)
7. Eve was created from the _____ of man. (2 marks)
8. God created the first man from _____. (3 marks)
9. We should _____ our parents. (obey, disobey)(2 marks)

IRE ACTIVITIES (10 marks)

1. Which surah talks about the disbelievers? _____ (Nasr, Masad, Kafirum)
2. Belief in _____ is the last pillar of Iman.(Qadar, last day, angels)
3. On which day of the week will Qiyamah happen? _____
(Monday, Thursday, Friday)
4. _____ was the first wife of prophet(s.a.w).(Khadijah, Aisha, Ramlah)
5. _____ was the month the prophet(s.a.w) was born.
(Ramadhan, Rabiul Awwal, Rajab)
6. The prophet(s.a.w) worked as a _____.
7. Eidul Fitr is celebrated on the day of _____.
(10th Dhulhijjah, 1st Shawal, 1st Dhul Hijjah.)
8. Muslims worship in a _____. (church, mosque)
9. Standing posture during swalah is known as _____.
(Jalsa, Qiyama, Rukuu)
10. We conclude salah by saying _____.(Tebeer, Taalim)