



2021/22

20210103

Capital Assessment Test Monitoring Learner's Progress

HOME SCIENCE / PHYSICAL EDUCATION ART / CRAFT AND MUSIC

YEAR 2021: GRADE 4

Name: _____

Learner's Number

Gender: Boy Girl



County Name: _____ County Code

Sub-County Name _____ Sub-County Code

School Name: _____ School code

OFFICIAL USE ONLY

ASSESSMENT RUBRICS

CBC

SUBJECTS:	Exceeds Expectations	Meets Expectations	Approaching Expectations	Below Expectations
H/SCIENCE	20-17	16 - 13	12 - 8	7 - 0
P. E	20-17	16 - 13	12 - 8	7 - 0
ART/CR/MUS	33 - 27	26 - 20	19 - 15	13 - 0

GRADE 4 / HOME SCIENCE / PHYSICAL & HEALTH EDUCATION



TURN OVER

1. Name the food we eat to make our body healthy. (3mks)




(a) _____

(b) _____

(c) _____

(d) _____

2. Draw and name three personal items (3mks)




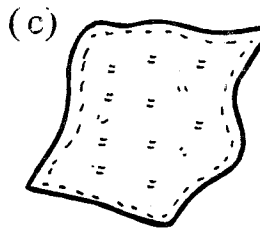
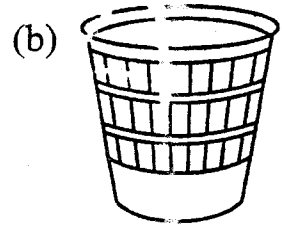

3. Name three basic needs (3mks)

(a) _____


(b) _____

(c) _____

4. Name the items used to clean the house (3mks)




5. Name the play items (2mks)


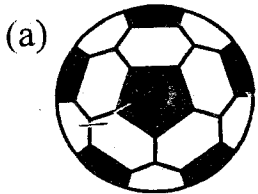


PHYSICAL EDUCATION

1. Draw an athletic track showing the starting point of 100m and 200m race (5mks)



2. Name the play items (4mks)



3. Name two commands in athletic? (2mks)

(a) _____

(b) _____

4. List four materials used to improve a ball (4mks)

(a) _____

(b) _____

(c) _____

(d) _____

5. Write down two safety measures when improvising a ball

(a) _____

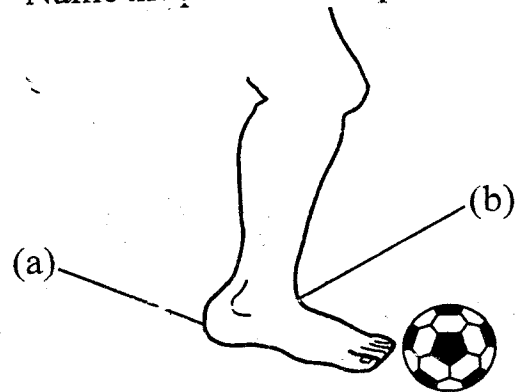
(b) _____

6. Name three games played in your locality

(a) _____

(b) _____

7. Name the parts used to pass a ball



(a) _____

(b) _____

8. We throw the ball using the _____

ART/CRAFT

1. Complete the following patterns

(a) *aaa* _____

(b) *ddd* _____

(c) *hhh* _____