

**PRE-PRIMARY 2 - YEAR 2023**  
**MONITORING LEARNER'S PROGRESS**  
**MATHEMATICAL ACTIVITIES**

**PP2**

YOUR NAME: ..... SCHOOL..... DATE.....

**1. Write numbers 1 -15.**

_____	_____	_____	_____	_____
_____	_____	_____	_____	_____
_____	_____	_____	_____	_____

**2. Put together (+).**

$4 + 3 =$  \_\_\_\_\_

$6 + 1 =$  \_\_\_\_\_

$3 + 5 =$  \_\_\_\_\_

$8 + 2 =$  \_\_\_\_\_

**Take away (-)**

$6 - 1 =$  \_\_\_\_\_

$10 - 5 =$  \_\_\_\_\_

$8 - 2 =$  \_\_\_\_\_

$11 - 10 =$  \_\_\_\_\_

**3. Draw enough balls.**

$5 =$  \_\_\_\_\_

$6 =$  \_\_\_\_\_

$3 =$  \_\_\_\_\_

$8 =$  \_\_\_\_\_

$10 =$  \_\_\_\_\_

#### 4. Match

$2 + 4$

$2 + 2$

$1 + 2$

$5 + 3$


$2 + 2$

$4 + 2$


$3 + 5$

$2 + 1$


#### 4. Fill in the name of the shapes.




R\_\_\_\_\_ctangle



Squ\_\_\_\_\_re



\_\_\_\_\_val



Circl\_\_\_\_\_

#### Assessment Rubric

Exceeds expectation	Meet expectation	Approaching expectation	Below expectation
4	3	2	1
35-40	25-34	15-24	0-14