

COMPETENCE BASED CURRICULUM

SASON
003

GRADE 3 - YEAR - 2023

MATHEMATICS ACTIVITIES.

Name

Learner's Number

--	--	--

Gender: Boy

--

 Girl

--

County Name: County Code:

--	--	--

Sub-county Name: Sub-county code

--	--	--

School Name: School Code:

--	--	--

TEACHER'S ASSEMENT RUBRIC.

The grid below is to be filled by the teacher after marking the learner's work.

Number of questions	
Number of correct questions	
Performance level	

- Which is the third day of the week? _____
- Which is the sixth month of the year? _____

Fill in the box with the correct number.

3.	60		80		100	
4.	55	50	45			30

What is the place value of digit 4 in these numbers.

- 452 _____
- 341 _____
- 204 _____

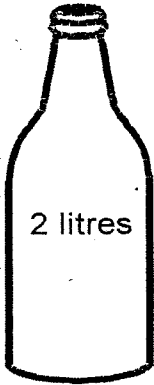
What is the fraction of the unshaded part?



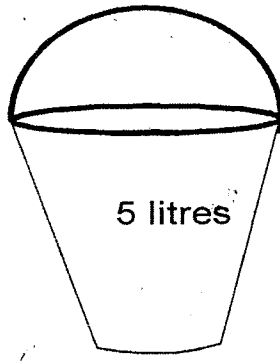
Add.

10.
$$\begin{array}{r} 127 \\ + 32 \\ \hline \\ \hline \end{array}$$

1. Which one contains more? _____



Bottle




Bucket

2. How many days are there in the month of January? _____

Geometry.

3. Study the pattern below.



Which shape has been used to make the pattern? _____

Name the following lines.

24.



25.

