

COMPETENCE BASED CURRICULUM

GRADE 2 - YEAR - 2023

SASON
002

MATHEMATICS ACTIVITIES.

Name

Learner's Number

--	--	--

Gender: Boy

--

 Girl

--

County Name: County Code:

--	--	--

Sub-county Name: Sub-county code

--	--	--

School Name: School Code:



--	--	--

TEACHER'S ASSEMENT RUBRIC.

The grid below is to be filled by the teacher after marking the learner's work

Number of questions	
Number of correct questions	
Performance level	

Count and write.



Fill in the missing numbers.

3. 8, 10, _____, 14, 16, 18

4. 20, 18, 16, _____, 12, 10

How many hundreds, tens and ones?

5. 80 is _____ tens and _____ ones

6. 103 is _____ hundreds _____ tens and _____ ones

7. 3 is _____ tens and _____ ones.

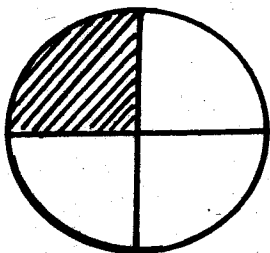
Write in words.

8. 20 _____

9. 15 _____

10. 11 _____

11. Which part is shaded? _____



Work out;-

12. $40 + 3 =$ _____

13. $2 + 8 + 5 =$ _____

14. 74
 $+ 14$

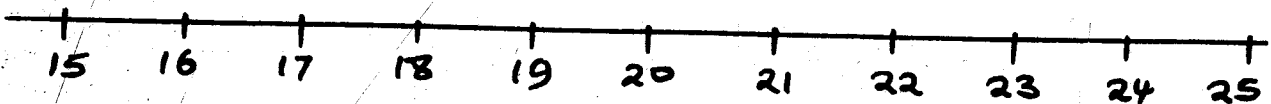
15. $14 - 9 =$ _____

16. 68
 $- 3$

17. 97
 $- 16$

18. John had 28 rabbits. 5 rabbits died. How many rabbits did he remain with? _____

19. Add using number line. $17 + 3 =$ _____




$3 \times$ _____ $=$ _____

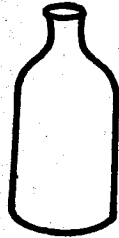
21. Share 25 oranges among 5 children each child will get _____ oranges.

Measurement.

22. Which one holds less? _____



A.



B.

23. Circle the heavy one. _____



24. Your weight is measured in _____ (metres, kilograms)

25. Name the line below.

