

MONITORING LEARNERS PROGRESS

SASON
009

GRADE 5 - YEAR - 2022

ART CRAFT, MUSIC AND PHYSICAL EDUCATION

Name

Learner's Number

Gender: Boy

Girl

County Name:

County Code:

Sub-county Name:

Sub-county code

School Name:

School Code:

TEACHER'S ASSEMENT RUBRIC.

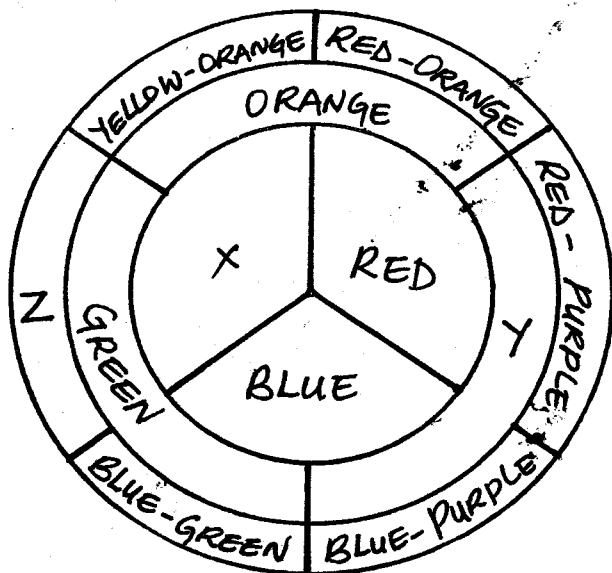
The grid below is to be filled by the teacher after marking the learner's work.

Strand	Exceeds Expectations	Meets Expectations	Approaching Expectations	Below Expectation
Art and Craft				
Music				
Physical Education				

ART AND CRAFT.

1. i) What is a colour? (1mk)

ii) Below is a colour wheel, identify and name the missing colours.

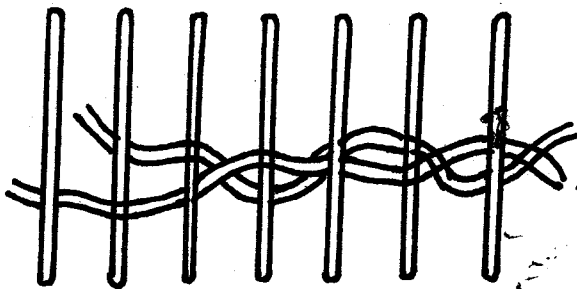



x _____
y _____
z _____

(3mks)

2. i) Name 4 items that are made using weaving technique. (2mks)

ii) Observe the types of weave below and name them. (2mks)






3. i) What is collage? (1mk)

ii) Name four materials that can be used to create collage. (2mks)

4. Create a crayon - etched picture of choice. (8mks)



MUSIC.

1. Name two types of songs you know. (2mks)

2. When two voices are in agreement when sung together they are said to be in _____ (1mk)

3. Name two wind instruments that you know. (2mks)

i) _____

ii) _____

4. Sing the second verse of Kenya National anthem in Kiswahili as your teacher listens. (5mks)

PHYSICAL EDUCATION.

1. Name one material used in improvising a relay baton. (1mk)

2. Name two field events. (2mks)
 - i) _____
 - ii) _____
3. List two players in the game of softball. (2mks)
 - i) _____
 - ii) _____
4. A game of rounders is played with a maximum of _____ players and a minimum of _____ players. (2mks)
Maximum _____
Minimum _____
5. A pass in soccer where a player swings the kicking leg to strike the ball with the middle part of the inside foot is called _____. (push pass, wall pass, outside of the foot pass) (1mk)
6. The game of volleyball is played by _____ players. (1mk)
7. Name one start in athletic. (1mk)

8. In the presence of your PHE teacher, demonstrate "the dig" in volleyball. (5mks)