



# SKY FLYER EXAMINATIONS SERIES STANDARD SEVEN

YEAR 2021

SOCIAL STUDIES/R.E

SKF21G

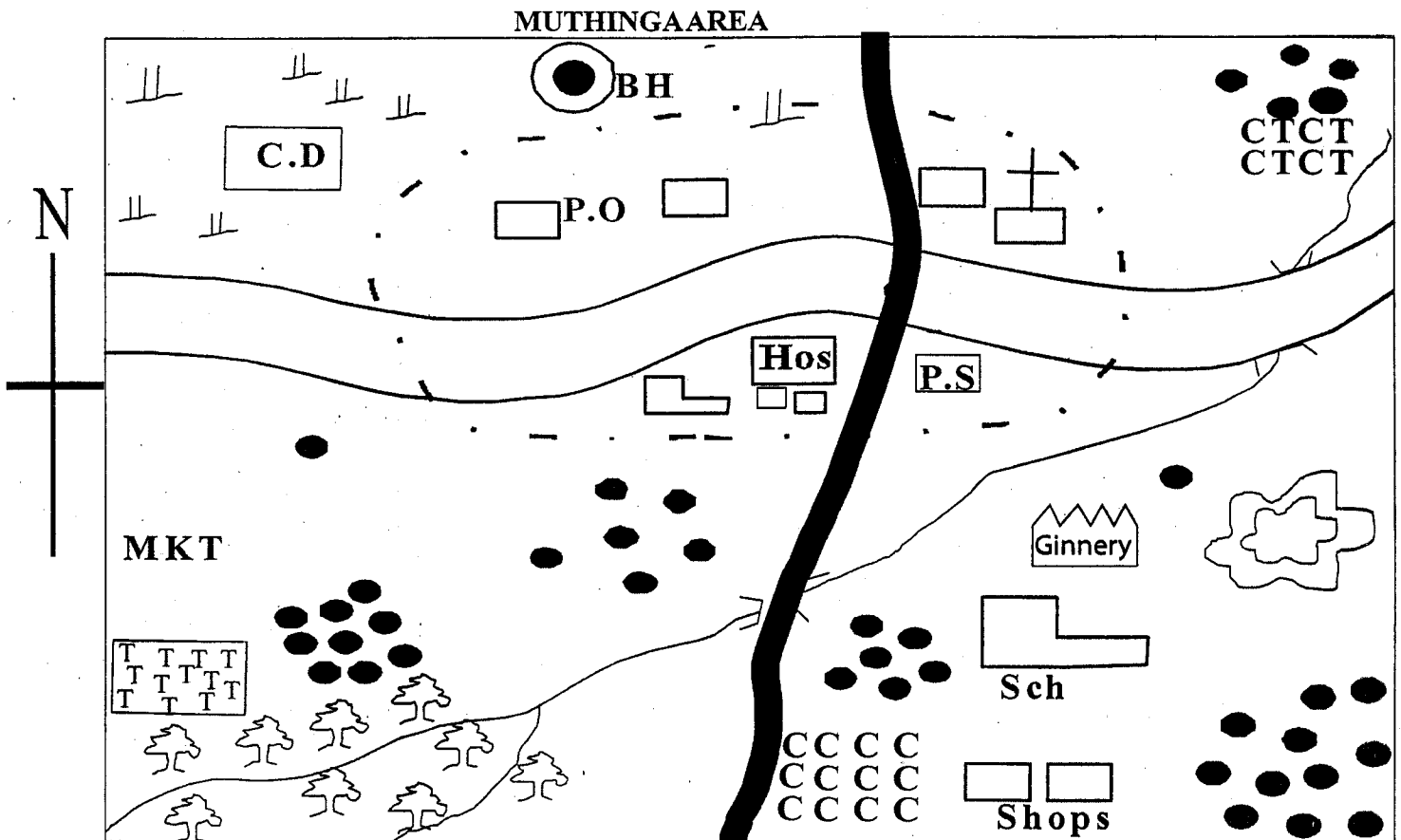
READ THESE INSTRUCTIONS CAREFULLY

- You have been given this question paper and a separate answer sheet. The question paper contains 50 questions.
- Make sure that you have written on the answer sheet

**Time: 2hr 15min**

(i) Your name

(ii) Name of your school



Key:-

Scale:- 0 1 2 3 4 5 6 7 8 9 10 Km

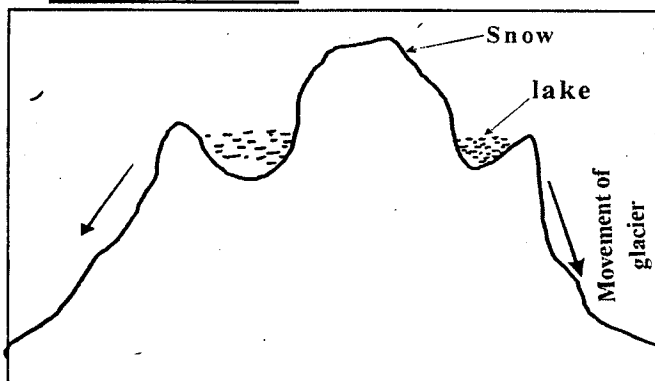
	Forest		Permanent building		P.O Post Office		G.O Governor's Office		Quarry
	Tea Farm		River & bridge		C.D Cattle dip		P.S Police station		Ginnery
	Coffee		Tarmac road		C.T Cotton		School		Market
	Scrubs		Murrum road		Hos Hospital		Church		
	Town boundary		Settlements						

**Study the map of Muthinga area and use it to answer questions 1-7.**

- Muthinga area is likely to be a \_\_\_\_\_  
A. county      B. location  
C. sub-location      D. sub-county
- The river in the map flows towards \_\_\_\_\_  
A. South West      B. South East  
C. North East      D. North West
- The climate of the North Western side of Muthinga Area is likely to be;  
A. cool and wet      B. hot and wet  
C. cool and dry      D. hot and dry
- The following economic activities are carried out in Muthinga area except?  
A. livestock keeping      B. lumbering

- C. crop farming      D. mining
5. What is the direction of the quarry from the cattle dip?  
A. South East      B. North West  
C. North East      D. South West
5. The type of soil found in the South Western side of Muthinga Area is likely to be;  
A. black cotton soil      B. red volcanic  
C. sandy soil      D. alluvial soil
7. People in Muthinga area is likely to be;  
A. muslims      B. traditionalists  
C. christians      D. pagans
3. Intermarriage between the Bantus and the Arabs resulted into the \_\_\_\_\_ language.  
A. Arabic      B. English  
C. Amharic      D. Swahili
9. Who is in charge of discipline in a public primary school  
A. the headteacher      B. deputy headteacher  
C. senior teacher      D. teacher on duty
10. The following are types of marriages in Kenya. Which one is conducted in a government office?  
A. customary      B. religious  
C. civil      D. hindu
11. When the sun is overhead the tropic of capricorn, people in the north experience \_\_\_\_\_ season  
A. winter      B. summer  
C. autumn      D. spring
12. Which one of the following countries of Africa is not crossed by the Equator?  
A. Gabon      B. Cameroon  
C. DRC      D. Somalia

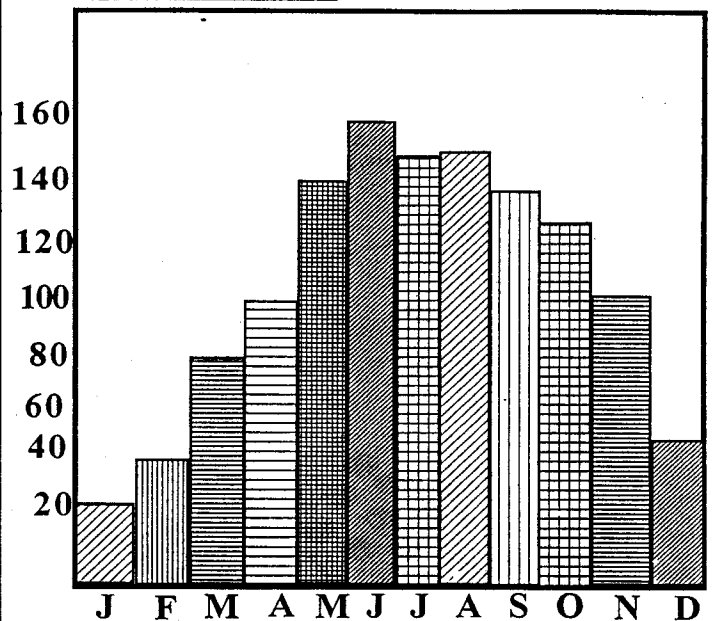
**Use the diagram below to answer questions 13 - 14.**



13. Lakes formed the above way are called  
A. crater lakes      B. ox-bow lakes

- C. corrie lakes      D. lava-dammed lakes
14. A good example of a lake formed the above way is \_\_\_\_\_  
A. L.Tana      B. Teleki Tarn  
C. L.Paradise      D. L. Kanyaboli
15. Which one of the following communities does not belong to the Afro-Asiatic group?  
A. Hausa      B. Tuaregs  
C. Andarawa      D. Soninke
16. The largest island country in Africa is \_\_\_\_\_  
A. Madagascar      B. Comoros  
C. Seychelles      D. Cape Verde


**Study the graph below and use it to answer questions 17 - 18**



17. The above graph represents \_\_\_\_\_ climatic region  
A. equatorial      B. tropical  
C. mediterranean      D. arid and semi-arid
18. Which statement below is true according to the above graph  
A. temperature range is about 2c  
B. the temperature are low when the rainfall is high  
C. the temperatures are high when the rainfall is high  
D. January and December are the wettest months
19. Which community below is correctly matched with its language group?  
A. Fulani- West Atlantic      B. Zulu - Cushites  
C. Mande - Bantus      D. Agikuyu - Nilotes
20. Which one of the following is not a duty of the headteacher in a school?  
A. He employs teachers

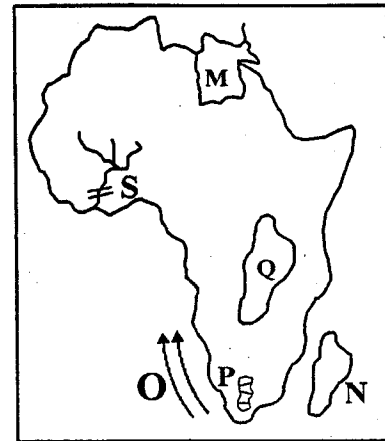
- B. He writes minutes during the school committee meetings
- C. He admits new pupils
- D. He assigns teachers duties

21. Who among the following leaders rebelled against the Europeans?
- A. Lenana
  - B. Kabaka Mutesa I
  - C. Cheif Mkwawa
  - D. Na bongo Mumia
22. The Volta River project was mainly to \_\_\_\_\_
- A. promote agriculture
  - B. promote good fishing ground
  - C. promote water for transport
  - D. provide water for HEP production
23. The following isa description of a certain crop grown in Africa.
- i) *It is mainly grown on small scale*
  - ii) *It is used to make spices*
  - iii) *It does well in hot and wet climate.-*
- The crop described above is \_\_\_\_\_
- A. Cocoa
  - B. Bananas
  - C. Cloves
  - D. Tea
24. Identify the fishing method shown below.



- A. Trawling
  - B. Purse- seining
  - C. Long lining
  - D. Net drifting
25. Which of the following trees is NOT found growing in natural forest?
- A. Spruse
  - B. Mvule
  - C. Oak
  - D. Mahogany
26. The following are developments taking place in pastrol areas .Which one is NOT?
- A. Irrigating pastureland
  - B. Building boarding schools
  - C. Introduction of veterinary services
  - D. Drilling of boreholes
27. The following are traditional methods of farming except one. Which one?
- A. Shifting cultivation
  - B. Bush Fallowing
  - C. Herding
  - D. Crop rotation
28. The following are factors influencing the climate of a place except?
- A. Longitude
  - B. Latitude
  - C. Altitude
  - D. Winds

**Use the map of Africa below to answer the questions that follow**



29. The capital city of the country marked M is called \_\_\_\_\_
- A. Tripoli
  - B. Khartoum
  - C. Cairo
  - D. Alexandria
30. The region marked Q is mainly occupied by the \_\_\_\_\_
- A. Bantus
  - B. Cushites
  - C. Semites
  - D. Nilotes
31. What effect does the ocean current marked O have on the adjacent land?
- A. It causes heavy rainfall
  - B. Causes fog and mist
  - C Causes earthquakes
  - D. It has no effects at all
32. The climatic region marked region shaded and marked N is kwown as \_\_\_\_\_
- A. Mediterianean region
  - B. Tropical climatic region
  - C. Equilatorial climatic region
  - D. Desert climate
33. Name the physical feature marked P \_\_\_\_\_
- A. Cape ranges
  - B. Drakensberg mountain
  - C. Atlas mountain
  - D. Bie plateau
34. River S is likely to be
- A. R. Niger
  - B. R. Congo
  - C. R. Nile
  - D. R. Senegal
35. In the Buganda Kingdom it was the work of the \_\_\_\_\_ to distribute land
- A. Kabaka
  - B. Omulamuzi
  - C. Katikiro
  - D. Bataka
36. The method of solving disputes where the matter is taken to court is called \_\_\_\_\_
- A. Reconciliation
  - B. Litigation
  - C. Negotiation
  - D. Mediation
37. Which one of the following skills was not taught through apprenticeship in the past
- A. Ironsmelting
  - B. Midwifery
  - C. Hunting
  - D. Collecting firewood

38. The following communities participated in the long distance trade except?  
 A. Nyamwezi B. Buganda  
 C. Agikiyu D. Akamba
39. The highest subordinate court in Kenya is \_\_\_\_\_  
 A High Court B. Supreme Court  
 C. Chief Magistrate Court D. Kadhis Court
40. Which one of the following boxes consists of block mountains only?  
 A. 

Pare
Aberdares
Karas

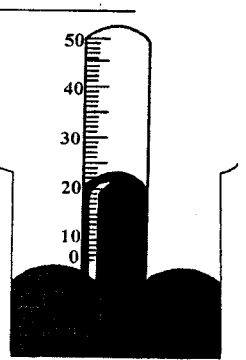
 B. 

Ahaggar
Tibest
Namuli

  
 C. 

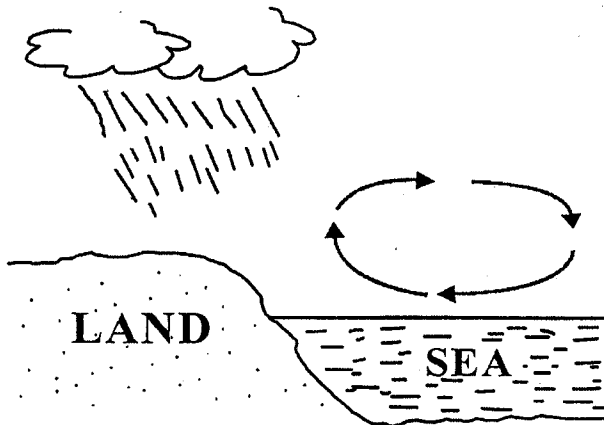
Atlas
Cape ranges
Akwapim

 D. 

Kenya
Kilimanjaro
Meru
41. Which one of the following was the main reason why Europeans powers scrambled for colonies in Africa?  
 A. Pride and prestige  
 B. Search for raw materials  
 C. To spread Christianity  
 D. To continue slave trade
42. The weather instrument drawn below is called \_\_\_\_\_  

- A. Thermometer B. Rain gauge  
 C. Hygrometer D. Barometer
43. The liquid used in the above instrument is \_\_\_\_\_  
 A. Water B. Mercury  
 C. Alcohol D. Spirit
44. John Speke came to Eastern Africa mainly to \_\_\_\_\_  
 A. Spread christianity  
 B. Look for a sea-route to India  
 C. Search for the source of River Nile  
 D. Stop slave trade
45. Which one of the following communities was ruled by hereditary Chiefs during the Colonial period?  
 A. Nyamwezi B. Buganda  
 C. Maasai D. Abawanga

46. The following are ways of demonstrating Patriotism except?  
 A. Paying taxes  
 B. Talking ill about our country  
 C. Taking part in tree planting activities  
 D. Attending national celebrations
47. The following are achievements of Julius Nyerere except?  
 A. He introduced communal farming  
 B. He made Kiswahili the national language  
 C. He was the founder member of OAU  
 D. He stopped slave trade in Tanzania
48. The following European powers got a portion of Somalia during partition of Eastern Africa except?  
 A. French B. British C. Germans D. Italians
49. Which of the following is NOT a responsibility of children in a family?  
 A. Keeping Family secrets  
 B. Helping household chores  
 C. Paying their own school fees  
 D. Learning positive values
50. The following minerals are correctly matched with their method of mining except?  
 A. Oil- drilling B. Soda ash-dredging  
 C. Cooper-deep shaft D. Gold-Open cast
51. The main function of the National Assembly in Kenya is \_\_\_\_\_  
 A. Making national laws  
 B. Velting presidential appointess  
 C. Approving the national budget  
 D. Discussing the conduct of state officers
52. The headquarters of East African Community (EAC) is located at \_\_\_\_\_  
 A. Arusha B. Djibouti  
 C. Nairobi D. Kampala
53. Who among the following IECB officials announces results at a polling station?  
 A. Polling Clerk B. Presiding Officer  
 C. Returing Officer D. IEBC chairman
54. Which of the following undermines law and order?  
 A. Being honest  
 B. Protecting the corrupt  
 C. Arresting drug peddlers  
 D. Fair distribution of resources
55. Lake Victoria, Chad and Bangweulu are examples of \_\_\_\_\_  
 A. Crater Lakes B. Downwarped Lakes  
 C. Fault Lakes D. Lava-dammed Lakes

56. The Main factor that undermines trade in Eastern Africa is \_\_\_\_\_  
 A. lack of common currency  
 B. Language barrier  
 C. poor transport network  
 D. production of similar goods
57. The first African to be nominated to the Legco was  
 A. Jomo Kenyatta      B. Julius Gichuru  
 C. Eluid Mathu        D. Dedan Kimathi
58. The diagram below shows the formation of a sea breeze. It occurs during \_\_\_\_\_



- A. night                      B. day  
 C. afternoon                D. anytime
59. The brave Woman who led the Agriama to resist the British rule in Kenya was called \_\_\_\_\_  
 A. Wangari Maathai    B. Mekatilili wa Menza  
 C. Wangu wa Makeri    D. Mukite wa Nameme
60. In Kenya, Forests are protected aganist destruction mainly because \_\_\_\_\_  
 A. they are sources of rivers  
 B. they make the country beautiful  
 C they provide herbal medicine  
 D. they are homes for wild animals

**SECTION B.**

**CHRISTIAN RELIGIOUS EDUCATION**

61. According to Genesis story of creation, human beings are regarded as special beings MAINLY because \_\_\_\_\_  
 A. they were created on the sixth day  
 B. they disobeyed God's command  
 C. they were created in the image of God  
 D. they obeyed God
62. God mainly created man so that man could \_\_\_\_\_  
 A. live with the birds and animals  
 B. toil and till the land to grow food  
 C. take care of God's creation

- D. share in the moral value of God
63. The sign of the covenant between God and Noah was \_\_\_\_\_  
 A. water                      B. rainbow  
 C. cloud                      D. blood
64. Which one of the following activities shows Abraham's obedience to God?  
 A. Moving from Haran to Canaan  
 B. Visiting his cousin Lot  
 C Going to Egypt  
 D. Marrying Sarah
65. Joseph was loved most by his father. Which one of the following shows BEST reason for this act. He was \_\_\_\_\_  
 A. a dreamer                B. the first born  
 C. born when Jacob was old    D. wise
66. From which book was the Ethopian Eunuch reading when philip met him?  
 A. Isaiah                      B. Luke  
 C. Jeremiah                 D. Revelation
67. Who among the following acted as the forunner of Jesus?  
 A. Isaiah                      B. Joseph  
 C. Peter                        D. John the Baptist
68. The angel of death did not kill the Israelites First born males because \_\_\_\_\_  
 A. they defended themselves  
 B. they were leaving Egypt that night  
 C. they obeyed God's command  
 D. there was darkness over Egypt
69. When Solomon was the king of Israel he \_\_\_\_\_  
 A. made Jerusalem the capital city  
 B. captured Jerusalem  
 C. built the temple in Jerusalem  
 D. fought the Amelikites and deafeted them
70. Jesus taught the disciple to store riches in \_\_\_\_\_  
 A. their hearts                B. banks  
 C heaven                      D. the Church
71. Which one of the following practices was carried out by believers in the early church  
 A. Naming the children  
 B. burning incense  
 C. sharing meals  
 D. pouring libations
72. Which one of the following is a gift of the Holy Spirit ?  
 A. Knowledge                B. Mercy  
 C. Self- control                D. Kindness
73. "Happy are those who work for peace; God will call them His Children." (Matthew 5:9). These words are spoken by Jesus

- A. when attending a wedding  
 B. when He was being tested  
 C. when choosing the disciples  
 D. during the sermon on the mountain
74. Who among the following people led the israelites against the Midianites  
 A. David                      B. Ahab  
 C. Gideon                      D. Saul
75. King Herod wanted to know where Jesus had been born in order to \_\_\_\_\_  
 A. have Him killed  
 B. worship Him  
 C. presents gifts to Him  
 D. meet His parents
76. Moses went to live in the land of Midian because \_\_\_\_\_  
 A. he was escaping slavery  
 B. he felt unsafe in Egypt  
 C. he wanted to marry Jethro's daughter  
 D. he wanted to speak to God
77. The arrest of Jesus took place at \_\_\_\_\_  
 A. the temple in Jerusalem  
 B. the home of Peter  
 C. the garden of Gethsemane  
 D. the pool of Siloam
78. The parable of the lost son teaches Christians the value of \_\_\_\_\_  
 A. humility                      B. forgiveness  
 C. patience                      D. tolerance
79. Cleopas and his friends realised that they were talking to Jesus when he \_\_\_\_\_  
 A. thanked them              B. preached to them  
 C. performed a miracle      D. broke the bread
80. Saul, a persecutor of Christians was from \_\_\_\_\_  
 A. Lydda                      B. Treas  
 C. Tarsus                      D. Joppa
81. Who was healed by Peter near the temple in Jerusalem:  
 A. A crippled beggar      B. A paralysed man  
 C. A blind man              D. A demon possessed man
82. The teaching of Jesus that teaches christians to compare themselves to little children is about \_\_\_\_\_  
 A. who is the greatest      B. how to pray  
 C. keeping vows              D. the narrow door
83. Jesus was rejected by His own people in \_\_\_\_\_  
 A. Cana                      B. Bethany  
 C. Jericho                      D. Nazareth
84. Jesus chose His first disciples when he found them \_\_\_\_\_  
 A. herding                      B. fishing  
 C. collecting taxes          D. praying
85. Who did God send to tell King David about his sins?  
 A. Ahija B. Nathan C. Zadok D. Samuel
86. Which one of the following is not true about Christian service?  
 A. The Bible teaches us to be to be concerned with serving others  
 B. When we serve others we serve the nations  
 C. When we srve others we serve God  
 D. We work to serve our intrests
87. Who among the following did NOT recieve information from an angel about the birth of Jesus?  
 A. King Herod                      B. Shepherds  
 C. Mary                              D. Joseph
88. The name Jesus means \_\_\_\_\_  
 A. Emmanuel                      B. Saviour  
 C. Christ                              D. Messiah
89. What is the BEST advice to give a Christian who is idle  
 A. Join a church choir  
 B. Take a book and read  
 C. Be involved in charity work  
 D. Talk with friends
90. The first person to translate the Bible into local languages was  
 A. Dr David Livingstone  
 B. William Mackinnon  
 C. Bishop Hanigton  
 D. Dr. Ludwing Krapf