
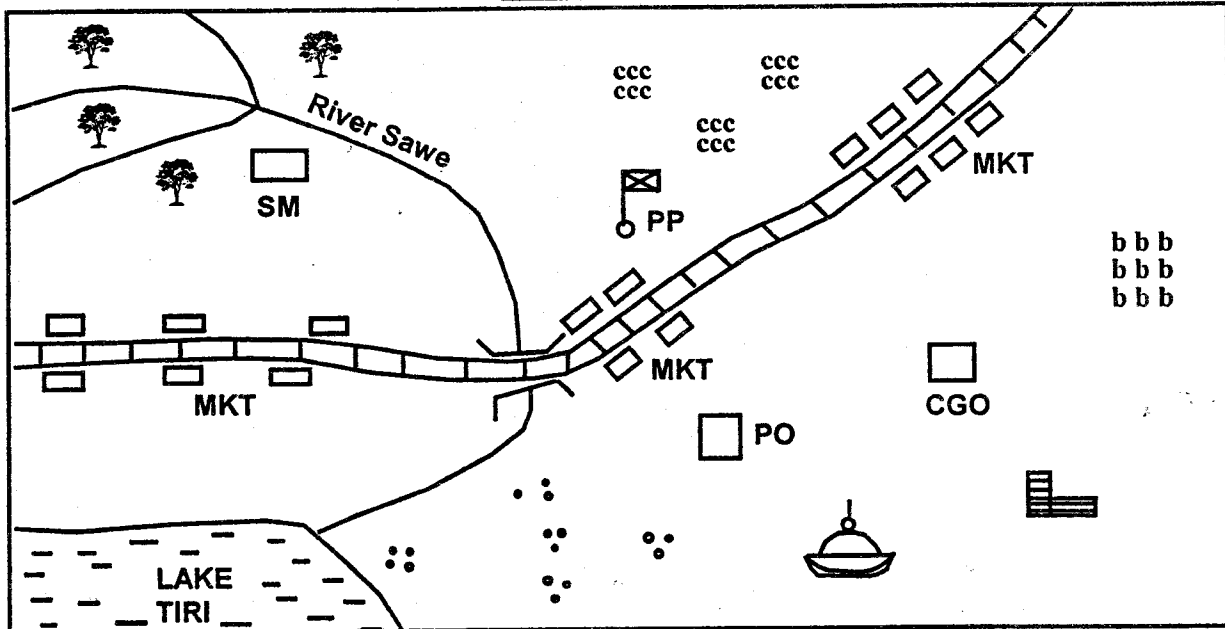


NGULU AREA

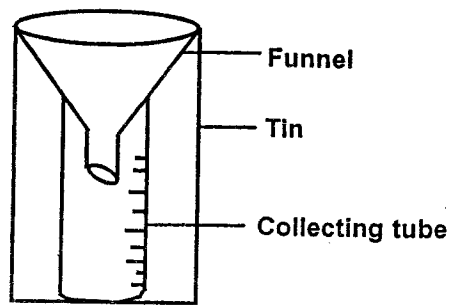


KEY





	Forest	SM	Saw mill		Houses
PO	Post Office	PP	Police Post		Bean farm
MKT	Market		Tarmac road		School
CGO	County Government Offices		Mosque		Coffee farm

Study the map of Ngulu Area above and answer questions 1 – 7

- What is the direction of Lake Tiri from the police post?
 - North East
 - South West
 - North West
 - South East
- What is the climate of the Northern part of Ngulu area?
 - Cool and wet
 - Hot and wet
 - Hot and dry
 - Warm and cool
- Which one of the following economic activities is NOT carried out in Ngulu area?
 - Farming
 - Lumbering
 - Trading
 - Fishing
- Who is the administrative officer in charge of Ngulu area?
 - Chief
 - Police officer
 - Governor
 - Member of County Assembly
- The people of Ngulu area are
 - Christians
 - Hindus
 - Pagans
 - Muslims
- The type of settlement found in Ngulu area can be said to be
 - scattered
 - nucleated
 - dense
 - linear
- River Sawe flows towards
 - South West
 - South East
 - North East
 - North West
- Which one of the following rivers does not drain into Lake Turkana?
 - River Ewaso Nyiro South
 - River Kerio
 - River Turkwel
 - River Omo
- Which country borders Kenya to the North West?
 - Tanzania
 - South Sudan
 - Sudan
 - Uganda
- The plateau which is referred to as a plateau within a plateau is
 - Uasin Gishu Plateau
 - Nyika Plateau
 - Yatta Plateau
 - Laikipia Plateau
- The diagram below shows a weather measuring instrument



It measures rainfall in

- A. kilograms B. litres
C. millilitres D. millimetres
12. Which element of a map is used to get the actual distance on the ground represented on a map?
A. Key B. Frame C. Scale D. Compass
13. Which one of the following tree species is a softwood?
A. Pine B. Mahogany
C. Camphor D. Mvule
14. The hills in a plateau that resisted erosion are known as
A. ranges B. inselbergs
C. valleys D. islands
15. The following Kenyan communities are Plain Nilotes except
A. Njemps B. Samburu
C. Kipsigis D. Turkana
16. Which one of the following statements is NOT correct about the traditional methods of farming?
A. Farming was done in large scale
B. Farming was mainly for subsistence
C. Simple farming tools were used
D. Labour was mainly provided by family members
17. Mangrove forests are mainly found in
D. highland areas B. plateau areas
C. coastal lowlands D. lake basin area
18. All the following were traditional methods of preserving fish. Which one was NOT?
A. Sundrying B. Salting
C. Smoking D. Canning
19. Which set of communities below belong to the Western Bantus?
A. Abagusii, Abakuria, Abaluhya
B. Abawanga, Abasuba, Luo
C. Agikuyu, Akamba, Ameru
D. Pokomo, Mijikenda, Giriama
20. Who among the following was the second Prime Minister in Kenya?
A. James Gichuru B. Raila Odinga
C. Jomo Kenyatta D. Joseph Murumbi
21. Three of the following are modern methods of communication. Which one is NOT?
A.  B. 
C.  D. 

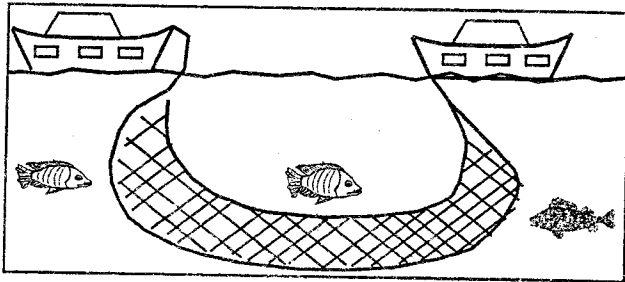
22. The following were traditional methods of teaching except
A. through literacy skills
B. through participation
C. through riddles and folk tales
D. through story telling
23. Which one of the following mountains in Kenya is found at its border with Uganda?
A. Mt. Longonot B. Mt. Kenya
C. Mt. Elgon D. Mt. Suswa
24. Which one of the following is a drainage feature?
A. River Nzoia B. Ramogi Hill
C. Nyika Plateau D. Kerio Valley
25. Which one of the following is NOT a service industry?
A. Fruit Canning B. Insurance
C. Banking D. Transport
26. Which one of the following methods is used in the mining of limestone at Bamburi in Mombasa?
A. Dredging B. Open cast
C. Evaporation D. Deep shaft
27. In democracy, people
A. are given leaders B. nominate leaders
C. elect leaders D. appoint leaders
28. In Kenya, general elections are held after every _____ years
A. 10 B. 6 C. 2 D. 5
29. Three of the communities are nomadic pastoralists. Which one is NOT?
A. Ilchamius B. Turkana
C. Tugen D. Samburu
30. The following are ways of acquiring citizenship in Kenya except
A. by birth
B. through registration
C. through dual citizenship
D. by adoption
31. Which of the following is the main problem facing wildlife in Kenya?
A. Insecurity B. Poaching
C. Lack of hotels D. Poor roads
32. The best method to transport petroleum products from Mombasa to Eldoret is by use of
A. road B. air C. water D. pipeline
33. The diagram below shows a road sign



What does the road sign mean?

- A. Children are walking on the road
B. There is a school nearby
C. Only pedestrians are allowed here
D. Children stay here
34. A factory which changes sugarcane into sugar is called a
A. sugary B. ginnery
C. jaggery D. miller
35. Kenya was colonised by the
A. British B. Germans

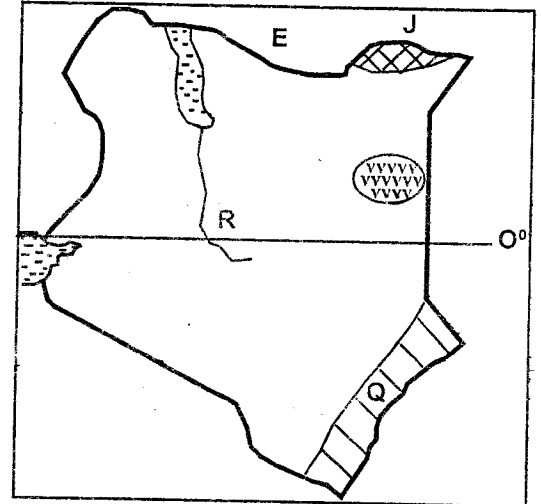
- C. Portuguese D. French
36. The main cause of road accidents on the Kenyan roads is
 A. poor roads
 B. speeding
 C. unroadworthy vehicles
 D. careless use of roads
37. The growing of flowers for export is referred to as
 A. horticulture B. floriculture
 C. viticulture D. subsistence
38. Which mineral is wrongly matched with the place it is mined in Kenya?
 A. Fluorspar – Gilgil
 B. Diatomite - Kariandusi
 C. Limestone – Athi River
 D. Soda ash – Lake Magadi
39. The method of fishing drawn below is likely to be



- A. purse seining B. trawling
 C. long lining D. net drifting
40. Which cash crop is mainly used to manufacture insecticides?
 A. Coffee B. Cotton C. Pyrethrum D. Tea
41. Which one of the following is the best soil for farming?
 A. Sandy soil B. Loam soil
 C. Gravel D. Clay soil
42. Cattle kept in a ranch are mainly reared for
 A. beef B. milk C. manure D. transport
43. Which one of the following is NOT an importance of peace in the society?
 A. It attracts fear among people
 B. It instills fear among people
 C. It ensures that people carry on their activities freely
 D. It ensures respect for the rule of law
44. Tourism is important in Kenya mainly because
 A. it improves agriculture
 B. it improves infrastructure
 C. it creates employment
 D. it earns the country foreign exchange
45. Who among the following was a famous Giriama woman who resisted the British?
 A. Wangu wa Makeri B. Mukite wa Nameme
 C. Mekatilili wa Menza D. Waiyaki wa Hinga
46. The Kenya National flag is a symbol of
 A. national unity B. peace, love and unity
 C. democracy D. harmony
47. The cutting down of trees where they have been planted is described as
 A. agro forestry B. afforestation
 C. deforestation D. re-afforestation
48. Which one of the following is an example of a service industry?
 A. Insurance industry B. Cement industry

- C. Mobile phone industry D. Paper industry
49. Which one of the following lakes is NOT found on the floor of the Rift Valley?
 A. Lake Turkana B. Lake Magadi
 C. Lake Elementaita D. Lake Victoria
50. Which one of the following is a seasonal river?
 A. Ewaso Nyiro North B. River Turkwel
 C. Ewaso Nyiro South D. River Nzoia
51. Who among the following was the first African to be appointed as a member of Legco in 1944?
 A. Harry Thuku B. James Thuku
 C. Eliud Mathu D. Apollo Ohanga
52. Which arm of the government has the duty of making laws in Kenya?
 A. The Judiciary B. The Legislature
 C. The Executive D. The Cabinet

Use the map of Kenya below to answer questions 53 – 56



53. The climate experienced at the shaded area marked Q is likely to be
 A. cool and wet B. cool and dry
 C. hot and wet D. hot and dry
54. The feature marked vvvv represents
 A. Lotikipi Plains B. Loita Plains
 C. Lorian Swamp D. Awara Plains
55. What is the name of the river marked R?
 A. River Kerio B. River Turkwel
 C. River Ewaso Nyiro South D. River Ormo
56. The tourist attraction marked J is likely to be
 A. Malka Mari
 B. Maasai Mara Game Reserve
 C. Puma National Park D. Sibiloi National Park
57. The title of the religious leader among the Ameru people was
 A. Njuri Ncheke B. Nkomongo
 C. Mugwe D. Njuri Impere
58. Which one of the following types of fish is caught in Kenyan lakes?
 A. Mullet B. Sardines C. Tuna D. Nile perch
59. Which one of the following is NOT a form of child abuse?
 A. Bullying B. Counselling
 C. Excessive caning D. Heavy manual work
60. Which of the following animals is not kept in a poultry farm?
 A. Ostrich B. Chicken C. Ducks D. Geese

C.R.E.

61. The first human being to be created by God was
A. Abel B. Adam
C. Abraham D. Eve
62. David was the son of
A. Jacob B. Jesse
C. Abraham D. Elikanah
63. King Solomon asked God for
A. wisdom B. wealth
C. authority D. power
64. The first person in the Bible to disobey God was
A. Cain B. Abel
C. Eve D. Noah
65. Who among the following Kings of Israel built a temple for God?
A. Solomon B. David
C. Saul D. Ahab
66. King Ahab wanted Naboth's
A. children B. house
C. vineyard D. cattle
67. Moses was given the ten commandments at Mount
A. Carmel B. Nebo
C. Olive D. Sinai
68. Jesus raised _____ from the dead
A. Zacheus B. Nicodemus
C. Lazarus D. John the Baptist
69. Who led the people of Israel from the land of Egypt?
A. Moses B. Abraham
C. Caleb D. Joshua
70. Samuel lived with the priest called _____ in the temple
A. Elikanah B. Eli
C. Jonathan D. Terah
71. God created the following except
A. cars B. plants
C. water D. animals
72. The Bible has a total of _____ books
A. 29 B. 66
C. 39 D. 27
73. _____ was asked by God to sacrifice his son
A. Noah B. Isaac
C. Jacob D. Abraham
74. The following are qualities of a good leader except
A. peace loving B. caring
C. honest D. corrupt
75. Jesus fed _____ people using five loaves of bread and two fish
A. 500 B. 4000
C. 5000 D. 2000
76. Who was the mother of John the Baptist?
A. Elizabeth B. Mary Magdalene
C. Sarah D. Hannah
77. Who among the following people built the ark?
A. Solomon B. Abraham
C. David D. Noah
78. The most loved disciple of Jesus was
A. James B. Thomas
C. Peter D. John
79. Jesus was brought up in the town of
A. Jericho B. Bethany
C. Nazareth D. Bethlehem
80. Tabitha was a _____ woman
A. dishonest B. kind
C. selfish D. proud
81. Jesus walked on water to show that He had power over
A. nature B. death
C. life D. darkness
82. Who among the following helped the man who had been beaten up by thieves on his way to Jericho?
A. Jesus B. Good Samaritan
C. Peter D. Pastor
83. We go to church mainly to
A. worship God B. meet friends
C. sing songs D. offer sacrifices
84. Emmanuel means
A. Jesus with us B. Saviour
C. God with us D. Jesus son of God
85. Abel was the son of
A. Hannah and Elikanah
B. Isaac and Rebecca
C. Abraham and Sarah
D. Adam and Eve
86. Jesus washed His disciples feet to teach that a leader should be
A. proud B. wise
C. rich D. humble
87. Who among the following people helped Jesus carry the cross?
A. Simon of Cyrene
B. Joseph of Arimathea
C. James
D. Andrew
88. In the past, children were not expected to
A. work hard B. be honest
C. disobey adults D. eat
89. The wisemen visited baby Jesus with gifts such as
A. gold B. money
C. clothes D. toys
90. Which one of the following is a book from the Old Testament?
A. Acts B. Luke
C. Exodus D. John