

SCHOOL BASED EVALUATION TEST

STANDARD SEVEN - YEAR 2021

SOCIAL STUDIES & CRE

7


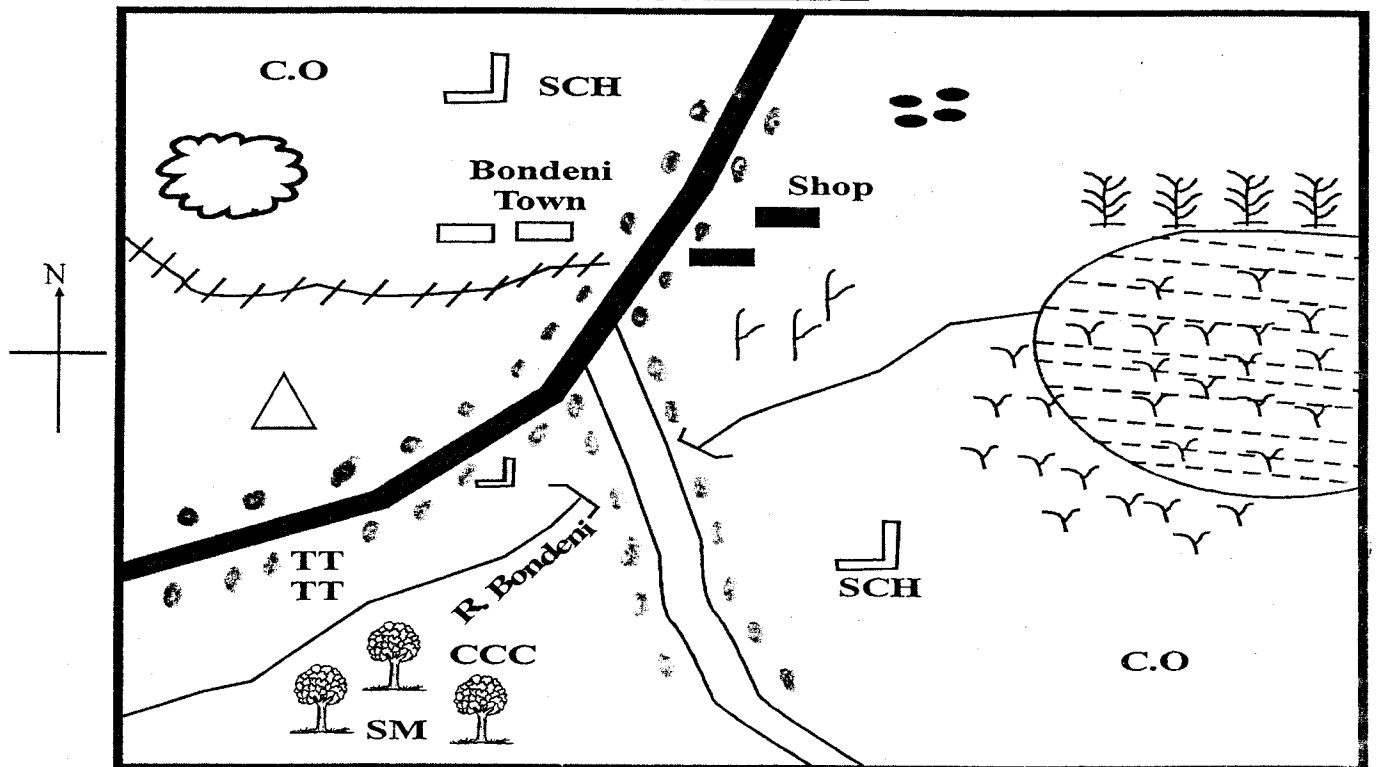
SASON
007

READ THESE INSTRUCTIONS CAREFULLY

Time : 2 Hr. 15 Min.

1. Use an ordinary pencil only.
2. Make sure that you have written on the answer sheet:-
 (I) YOUR INDEX NUMBER (II) YOUR NAME (III) NAME OF YOUR SCHOOL
3. When you have chosen your answer, mark it on the ANSWER SHEET, not in this question booklet.

BONDENI AREA



KEY:

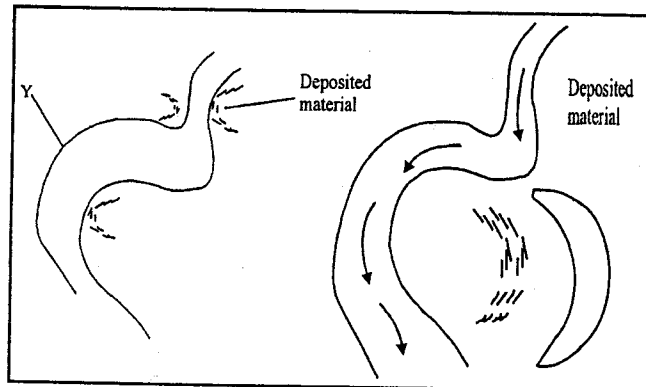
Forests Railway Line Tarmac Road CCC Coffee School	Murrum Road Hills Settlement C.O Chief Officers	Quarry TTT Tea Maize S.M Saw Mill Sugarcane Bridge Shops Reeds
--	--	---

Study the map of BONDENI AREA above and use it to answer questions 1- 7;

1. The lowest point of Bondeni area is likely to be;
 - A. North
 - B. South West
 - C. East
 - D. West
2. The climate of Eastern part of Bondeni area is likely to be _____.
 - A. cool and wet
 - B. hot and dry
 - C. cool and dry
 - D. hot and wet
3. The head of Bondeni area is _____.
 - A. Governor
 - B. Chief
 - C. District officer
 - D. District commissioner
4. Which of the following economic activity is **not** carried out in Bondeni area?
 - A. Mining
 - B. Trade
 - C. Cash crop farming
 - D. Tourism
5. The type of settlement in Bondeni area is _____.
 - A. sparsely
 - B. nucleated
 - C. linear
 - D. clustered
6. The people of Bondeni area are likely to be
 - A. Muslim
 - B. Pagans
 - C. Christians
 - D. Hindus
7. The **main** reasons for constructing the railway in Bondeni area was to
 - A. transport workers to the quarry
 - B. transport tea and coffee to the market
 - C. transport mineral mined at the quarry
 - D. transport maize to the market
8. Which of the following regions in Eastern Africa experiences modified equatorial climate?
 - A. Western Uganda
 - B. Coastal region of Tanzania
 - C. North Kenya
 - D. Northern Somalia
9. What is the importance of a school motto in a school?
 - A. It states the aims and beliefs of the school
 - B. It makes the schools activities run smoothly
 - C. It enables teachers to get salaries
 - D. It enables people to pass exams

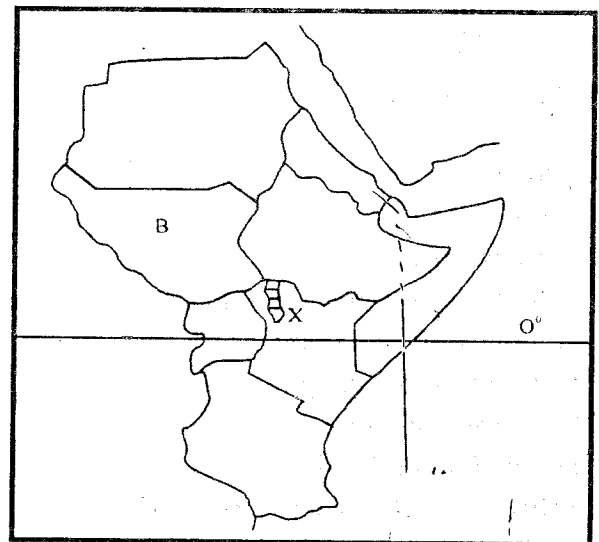
10. The Nandi, the Kipsigis and Pokot belong to the which language group _____.
 - A. Nilotes
 - B. Bantus
 - C. Cushites
 - D. Semites
11. The **best** method of transporting petroleum from Mombasa to Nairobi would be
 - A. road
 - B. pipeline
 - C. air
 - D. railway
12. Which of the following is the **main** economic activity in Kenya?
 - A. Mining
 - B. Tourism
 - C. Agriculture
 - D. Fishing
13. In a map, what would be an evidence to show that people living there are Hindus?
 - A. Presence of mosque
 - B. Presence of a church
 - C. Presence of a shrine
 - D. Presence of a temple
14. Three of the following lakes are found in Kenya **except** one. Which one is it?
 - A. Lake Turkana
 - B. Lake Tana
 - C. Lake Magadi
 - D. Lake Michelesor
15. Which one of the following is **not** a factor influencing the vegetation of a place?
 - A. Relief
 - B. Soil
 - C. Plains
 - D. Drainage
16. Which is the capital city of Burundi?
 - A. Asmara
 - B. Adis Ababa
 - C. Bujumbura
 - D. Kigali
17. The water body that is in the South East of Kenya is _____.
 - A. Red sea
 - B. Lake Victoria
 - C. Indian ocean
 - D. Lake Turkana

Use the diagram below to answer questions 18 - 20;



18. The diagram above show the formation of _____
- ox bow lake
 - lava dammed lake
 - Rift Valley
 - volcanic mountain
19. The part marked Y is _____
- escarpment
 - deposited material
 - corner
 - meanders
20. The above feature was formed through
- deposition of material
 - volcanic cerein
 - faulting
 - uplifting
21. The steep sides of Rift Valley are called _____
- valleys
 - horst
 - blocks
 - escarpments
22. Which of the following is a social cultural use of soil?
- Making blocks
 - Farming
 - Administering oaths and libations
 - Extraction of mineral salts
23. The totality of a person way of life is called
- taboo
 - culture
 - passage
 - morals
24. Which of the following communities is **correctly matched** with its original homeland?
- Ngoni - South Africa
 - Hehe - Horn of Africa
 - Dinka - Congo forest
 - Rendile - Barley Ghezel
25. The quickest means of communication that can reach many people within a short period of time is
- newspapers
 - radio
 - telephone
 - television
26. Who among the following is **not** elected by voters in a general elections?
- County governor
 - Senator
 - Ward representative member
 - County assembly speakers
27. Which of the following groups consist of crops grown in traditional agriculture in Kenya?
- Cassava, carrots, arrowroots
 - Yams, sorghum, millet
 - Millet, sorghum, wheat
 - Arrowroots, sweet potatoes, snow peas
28. Maloba a standard seven pupil saw two pupils fighting on her way to school. What was the best action to take?
- Run to school and report to teacher
 - Leave them to continue fighting
 - Stop them from fighting
 - Report them to the police
29. In traditional African society, an age set usually comprises of _____
- many families
 - many clans
 - many age groups
 - many societies
30. A responsible citizen is one who _____
- attend religious services always
 - owns alot of property
 - take part in development projects
 - arrest law breakers

Use the map below to answer questions 31 - 33



31. The latitude marked 0° is called _____
- Equator
 - Prime Meridian
 - Tropical of Cancer
 - Tropic of Capricorn
32. The country marked B was colonised by the
- Germans
 - British
 - Frenchs
 - Belgians

33. The national park found at point X is
 A. Tsavo B. Amboseli
 C. Sibiloi D. Malka Mari
34. The County Executive Committee is shared by the _____
 A. Senator
 B. President
 C. Governor
 D. Ward Representative
35. Which among the following communities collaborated with the British during colonial period?
 A. Agiriyama B. Nandi
 C. Ababukusu D. Wanga
36. Among the following member who does not belong to a nuclear family?
 A. Father B. Mother
 C. Sons D. Cousin
37. Which instruments is used to measure air pressure?
 A. Anemometer B. Barometer
 C. Windvane D. Thermometer
38. The Swahili culture came up as a result of intermarriage between Arabs and _____
 A. Indians B. Europeans
 C. Bantus D. Nilotes
39. The following are needs of a family;
 (i) Education
 (ii) Shelter
 (iii) Love
 (iv) Food
 (v) Security
 Which pair is made up of basic needs only?
 A. Education and love
 B. Food and security
 C. Shelter and love
 D. Shelter and food
40. Which of the following can lead to lawlessness in a county?
 A. Poor performance in examination
 B. Prolonged drought
 C. Discriminations
 D. Outbreak of diseases
41. Large farms where beef cattle are kept are called
 A. paddocks B. units
 C. ranches D. plantations
42. Which of the following places is the largest centre of sugarcane growing in Eastern Africa?
 A. Mumias B. Kenana
 C. Chemelil D. Muhoroni
43. Road signs helps drivers to drive _____
 A. roughly B. carelessly
 C. safely D. automatically
44. Areas with stagnant water encourage the growing of
 A. tall trees B. reeds
 C. short grass D. scrubs
45. Which of the following communities belong to the Plain Nilotes?
 A. Ilichemus B. Luo
 C. Tuger D. Kipsigis
46. In Kenya a person can become a citizen by _____
 A. naturalization B. voting
 C. registration D. association
47. The budget estimates in Kenya are presented by the minister for finance in the month of _____
 A. June B. January
 C. March D. December
48. Which of the following lakes was formed when water collected in the faults on the floor of Rift Valley?
 A. Lake Malawi B. Lake Chad
 C. Lake Benguela D. Lake Kiyoga
49. The traditional system of government of the Ameru was known as
 A. Njuri Ncheke B. Mugwe
 C. Kiruka D. Mtiba
50. Which of the following is not a moral value in the society?
 A. Respect B. Corruption
 C. Honesty D. Courage
51. Growing of flowers for sale is called
 A. horticulture B. floriculture
 C. agriculture D. agroforestry
52. The title used to refer to traditional leader of the Nyamwezi was
 A. Kabaka B. Ntemi
 C. Mganwe D. Mtwale
53. In Eastern Africa Inland fishing is done in
 A. Lake Victoria
 B. Lake Turkana
 C. Lake Tanganyika
 D. River Nile

54. The headquarters of Eastern Africa community (EAC) are in _____
 A. Nairobi B. Addis Ababa
 C. Djibouti D. Arusha
55. The arm of the government that makes and amends law is _____.
 A. Legislature
 B. Executive
 C. Judiciary
 D. Independence Electoral and Boundaries Commission (IEBC)
56. The body that conducts elections in Kenya is
 A. Parliament
 B. Judiciary
 C. Kenya Revenue Authority
 D. Independence Electoral and Boundaries Commission (IEBC)
57. In Kenya census is carried out after how many years?
 A. 6 years B. 10 years
 C. 20 years D. 5 years
58. The basic unit in the society is the _____
 A. clan B. age-group
 C. family D. schools
59. The first Prime Minister in Kenya was _____
 A. Oginga Odinga
 B. Kenneth Matiba
 C. Jomo Kenyatta
 D. Raila Odinga
60. Flowers are grown in special houses called
 A. seed bead B. granaries
 C. green houses D. paddocks

SECTION II - C.R.E

61. The **main** value that boys and girls in standard six should practice is
 A. suspension B. love
 C. jealousy D. hatred
62. When Abraham was called by God in Haran he
 A. left for a foreign land
 B. agreed to sacrifice his son
 C. was promised a child
 D. he took another wife
63. Jesus taught that the greatest is the one who
 A. has the strongest faith
 B. goes to church regularly
 C. helps his neighbour
 D. humble himself like a little child
64. The parable of the tax collector and the pharisee teaches Christians about ____
 A. respect B. humbleness
 C. kindness D. sharing
65. When Saul was going to Damascus ____
 A. he talked to a Samaritan women
 B. he was arrested and put in prison
 C. God talked to him from heaven
 D. he baptized an Ethiopian official
66. Christians today remember the death of Jesus when they _____
 A. celebrate Easter
 B. celebrate Christmas
 C. get new names at baptism
 D. give to the needy
67. Kalee insulted by his classmate but he does not insult him back. This is a good example of
 A. self control
 B. being responsible
 C. showing cowardice
 D. practising equality
68. When God called Moses he was living in ____
 A. Moab B. Egypt
 C. Midian D. Canaan
69. When Jesus called John and James they were
 A. collecting tax B. fishing
 C. baptising people D. threshing wheat
70. Before the coming of European missionaries in Kenya the Agikuyu people prayed facing ____
 A. the rising sun B. Mugumo trees
 C. West D. Mount Kenya
71. Jesus performed his first miracle when he
 A. raised lazarus
 B. walked on water
 C. calmed a storm at sea
 D. changed water into wine
72. Children are advised to have respect for elders because _____
 A. it is God's command
 B. elder are old people
 C. they need blessings by the elders
 D. they are like their parents

73. The twin brother of Esau was _____.
 A. Isaac B. Jacob
 C. Ishmael D. Joseph
74. Joel saw ripe mangoes in someone else farm. He went and picked a few, he broke the commandment of _____.
 A. do not steal
 B. do not kill
 C. honour your father and mother
 D. worship no other god but me
75. When you see your parents quarrelling you should _____.
 A. run away from home
 B. support your mother
 C. tell them to solve problem peacefully
 D. find out who is wrong
76. Christianity in Kenya was introduced by _____.
 A. Arab traders
 B. European missionaries
 C. slave traders
 D. freed slaves
77. The disciples got the power of the Holy Spirit
 A. on the day Jesus resurrected
 B. ten days after Jesus ascended to heaven
 C. when they were on their way to Emmaus
 D. forty days after Jesus resurrected
78. When God created the woman _____.
 A. he took her away from man
 B. he blessed her with a son
 C. he put her in Eden alone
 D. Adam gave her a name
79. How many brothers did Joseph the son of Jacob have?
 A. Eleven B. Twelve
 C. Ten D. Nine
80. God punished people during the time of Noah because _____.
 A. they were too many
 B. they were wicked and violent
 C. they were building a tall tower
 D. they had refused to multiply
81. We can take care of trees by _____.
 A. replacing those that have been cut
 B. using them for fuel
 C. eating their fruits
 D. cutting them when they are too many
82. The suffering of Job teaches Christians the importance of _____.
 A. showing kindness
 B. helping others
 C. being faithful
 D. being patient
83. King David disobeyed God when he
 A. planned for the murder of an innocent person
 B. took Naboth's vineyard
 C. married many foreign wives
 D. killed Goliath
84. When Christians come together to worship, they strengthen their
 A. ambitions B. education
 C. unity D. wealth
85. When an angel appeared to Zachariah he was
 A. praying in his house
 B. fishing in the lake Galilee
 C. threshing wheat at secret place
 D. offering sacrifice in the temple
86. When Jesus called Simon, he gave him the name _____.
 A. Andrew B. Peter
 C. John D. Philip
87. Which person did God save when Sodom and Gomorrah were destroyed?
 A. Abraham B. Noah
 C. Daniel D. Lot
88. Bringing gifts to a new born baby is a way of
 A. pleasing the mother
 B. welcoming a new member to the community
 C. assisting the mother with what she does not have
 D. giving sacrifices to the new born child
89. When European missionaries arrived in Kenya they first _____.
 A. built mission centres
 B. built the railway line
 C. wrote new Bibles
 D. took fertile land from Africans
90. The last book in the Old Testament is _____.
 A. Haggai B. Habbakuk
 C. Malachi D. Joel