



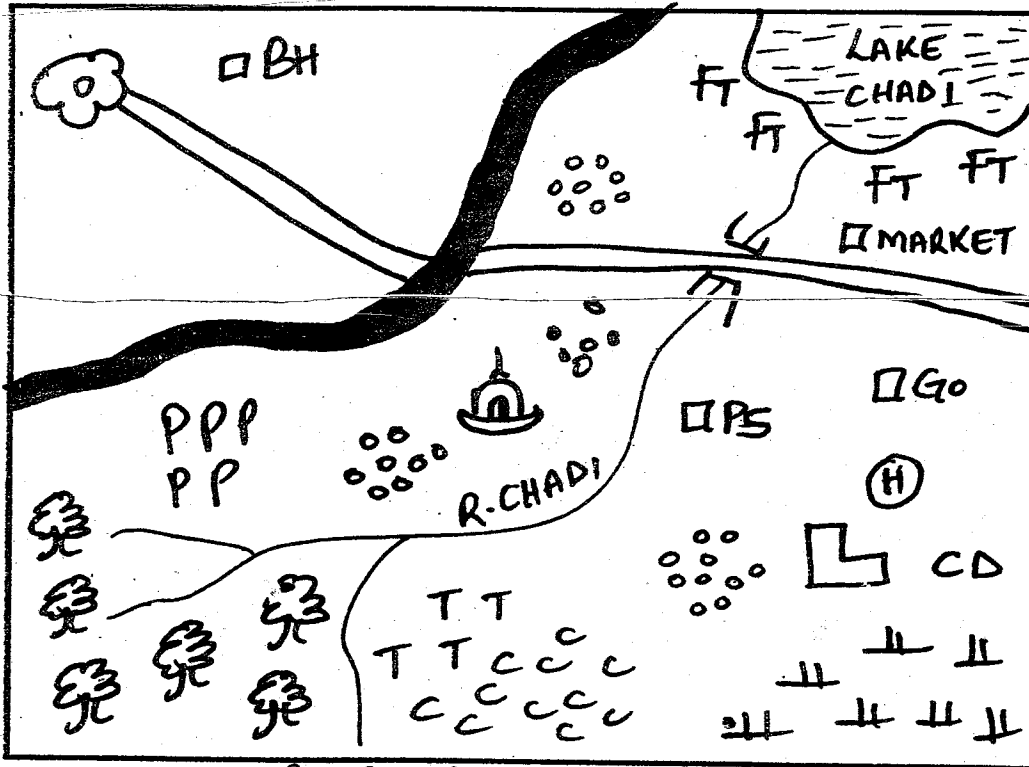
# CROWN EXAMINATION TEST

STD. 6 - TERM 3 - 2021

## SOCIAL STUDIES & CRE

Time: 2hrs

CHADI AREA



KEY	
	Forest
	Mosque
	Pyrethrum
	School
	Hospital
	Scrub
	Settlements
	Cattle dip
	Borehole
	Fishing traps
	Tea
	Coffee
	Police station



Study the map of Chadi Area and use it to answer questions 1 - 7.

- The main economic activity in Chadi area is
  - mining
  - agriculture
  - trade
  - fishing
- People in Chadi area are mainly \_\_\_\_\_
  - christians
  - muslims
  - pagans
  - hindus
- The head of Chadi area is the
  - Governor
  - M.p
  - M.C.A
  - Chief
- The settlement pattern in Chadi area is
  - linear
  - sparse
  - dense
  - clustered
- The climate around the forest is
  - cool and wet
  - hot and wet
  - cool and dry
  - cool and warm
- What is the direction of the forest from the hospital
  - South West
  - South East
  - North West
  - North East
- The soil around the forested areas in Chadi area is likely to be
  - volcanic soil
  - alluvial soil
  - Black cotton soil
  - Sandy soil
- Which of the following is the deepest Lake in Eastern Africa
  - Lake Baringo
  - Lake Bogoria
  - Lake Tanganyika
  - Lake Victoria
- The type of rainfall experienced near large water bodies is called \_\_\_\_\_ rainfall.
  - relief
  - cyclonic
  - covenctional
  - frontal
- Which one of the following was the main reason for the migration of the Bantus
  - Religious conflicts
  - Lack of water
  - Search of good agricultural land
  - For adventure
- Which of the following is not a basic need

of the family?

- A. Food                      B. Clothing  
C. Furniture                D. Shelter

12. Kano, Bilesha, Serengeti and Lotikipi are all \_\_\_\_\_ found in Eastern Africa.

- A. plateaus B. highlands C. valleys D. plains

13. Which one of the following is the main problem facing sisal growing in Kenya?

- A. Inadequate market  
B. drought  
C. Extensive labour during harvesting  
D. Competition from synthetic fibres

14. Among the following, which group contains cities found in East Africa

- |  |   |
|--|---|
| A. Nairobi<br>Kisumu<br>Mombasa<br>Kampala | B. Kismayu<br>Mandera<br>Moshi<br>Kampala |
| C. Kigali<br>Goma<br>Arusha<br>Kitui       | D. Nairobi<br>Thika<br>Kisumu<br>Kampala  |

15. Which one of the following contries of Eastern Africa has the highest population density?

- A. Sudan                      B. South Sudan  
C. Ethiopia                 D. Uganda

16. Which county in Eastern Africa was not colonised?

- A. Kenya                    B. Uganda  
C. Sudan                      D. Ethiopia

17. Rotation of the earth on its own axis causes

- A. seasons                    B. revolution  
C. climate                     D. day and night

18. Which town among the following is not a coastal town

- A. Kampala                    B. Kismayu  
C. Dar-es-salaam            D. Malindi

19. The equator divides the earth into two \_\_\_\_\_

- A. halves                      B. semi-circles  
C. hemispheres              D. spheres


20. The construction of the Kenya-Uganda railway started in \_\_\_\_\_

- A. Kisumu                     B. Kampala  
C. Mombasa                  D. Lamu

21. Among the following countries, which one is land-locked

- A. Uganda                     B. Eritrea  
C. Kenya                    D. Tanzania

Use the diagram below to answer questions 22 - 25.



22. The side of the mountain marked B is called the \_\_\_\_\_ side.

- A. rain side                    B. sloping side  
C. lee ward side              D. windward side

23. The main economic activity at the side marked B is

- A. hunting                      B. gathering  
C. ranching                    D. dairy farming

24. The type of rainfall shown above is commonly experienced in the \_\_\_\_\_

- A. Lake Victoria              B. Coastal Eastern  
C. North Eastern              D. Highlands

25. Among the following towns, which one is found in the side marked B

- A. Kiambu                      B. Embu  
C. Nyeri                        D. Nanyuki

26. What is the name given to logitude 0°

- A. tropic of capricon        B. prime meridian  
C. tropic of cancer          D. equator

27. Which of the following is not a function of a clan?

- A. Settling disputes among members  
B. Controlling the grazing land  
C. owning land on behalf of members  
D. cooking for the wives for their young men

28. People who forcefully take away cattle from their owners are called \_\_\_\_\_

- A. poachers                    B. pastoralists  
C. hunters                      D. cattle rustlers

29. Which type of vegetation among the following is found along Mount Kenya region?

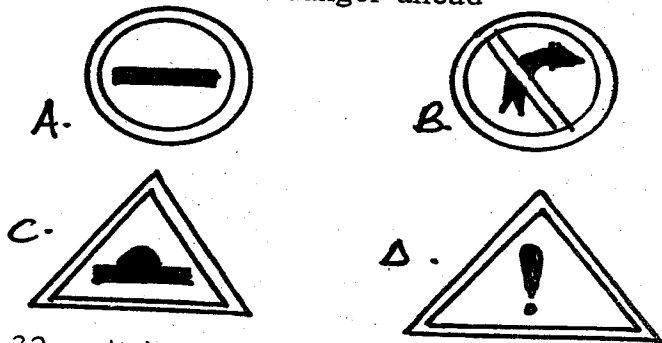
- A. Tropical rain forest  
B. Mangrove vegetation  
C. Papyrus vegetation  
D. Savannah vegetation

30. Among the following, which one is not a service industry

- A. Banking                     B. Education

- C. Laundry and cleaning  
D. Lumbering

31. Which one of the following road sign alerts motorists of danger ahead



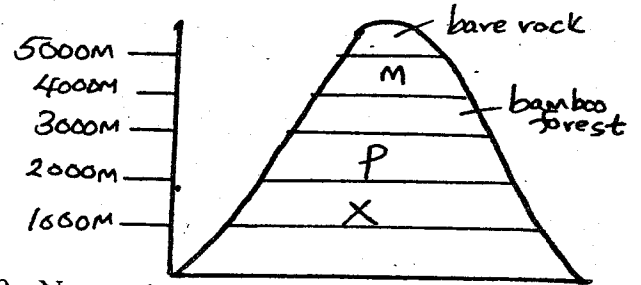
32. - it is an administrative centre  
- it is an educational centre  
- it is a cultural centre  
- it is an industrial centre  
- it is a transport and communication centre

The town described above is

- A. Tinja B. Arusha C. Musoma D. Kampala
33. The prime minister in the Buganda kingdom was called \_\_\_\_\_  
A. Kabaka B. Katikiro  
C. Omwenika D. Omulamuzi
34. The Nyamwezi people were led by a chief called \_\_\_\_\_  
A. Njuri Ncheke B. Mugabe  
C. Ntemi D. Wanyikulu
35. Which one among the following factors does not influence trade?  
A. Population size  
B. Transport network  
C. Climatic conditions  
D. Shape of the coastline
36. Amharic, Arabic and Tigrinya are \_\_\_\_\_ languages  
A. semitic B. Bantu  
C. Nilotic D. Cushitic
37. Which type of vegetation is found in Central Tanzania?  
A. Miombo woodlands  
B. Mangrove forest  
C. Lowland forest  
D. Savannah grassland
38. Who among the following were the first to visit Eastern Africa?  
A. Italians B. Arabs  
C. British D. Portuguese
39. Limestone is mined in the following areas except:

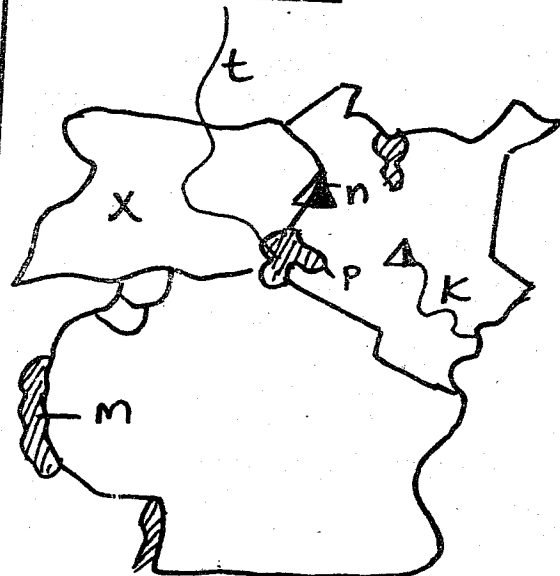
- A. Bamburi B. Athi River  
C. Sultan Hamud D. Kariandusi

Use the diagram below to answer questions 40 - 43.



40. Name the vegetation marked x  
A. savannah B. rain forest  
C. moss D. moorland
41. Name the vegetation marked p  
A. the rain forest B. Lichens  
C. Bamboo forest D. Moorland
42. The main economic activity in the region marked x is  
A. dairy farming B. crop cultivation  
C. pastoralism D. lumbering
43. This vegetation has been influenced by  
A. longitudes  
B. altitude  
C. nearness to water bodies  
D. latitudes

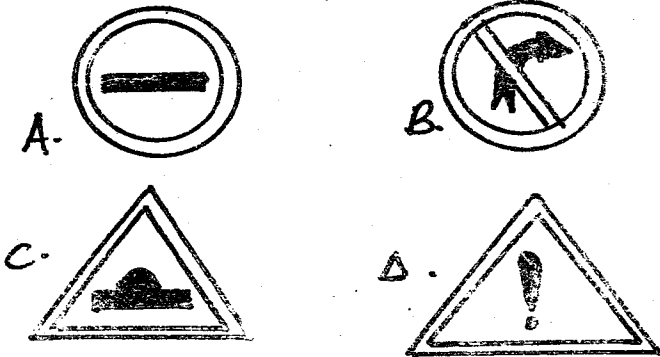
Use the diagram below which represents the map of Eastern Africa to answer questions 44- 49.



44. The river marked k is known as  
A. R. Nile B. R. Tana  
C. R. Athi D. R. Ruvuma

- C. Laundry and cleaning  
D. Lumbering

31. Which one of the following road sign alerts motorists of danger ahead



32. - it is an administrative centre  
- it is an educational centre  
- it is a cultural centre  
- it is an industrial centre  
- it is a transport and communication centre

The town described above is

- A. Tinja B. Arusha C. Musoma D. Kampala

33. The prime minister in the Buganda kingdom was called \_\_\_\_\_

- A. Kabaka B. Katikiro  
C. Omwenika D. Omulamuzi

34. The Nyamwezi people were led by a chief called \_\_\_\_\_

- A. Njuri Ncheke B. Mugabe  
C. Ntemi D. Wanyikulu

35. Which one among the following factors does not influence trade?

- A. Population size  
B. Transport network  
C. Climatic conditions  
D. Shape of the coastline

36. Amharic, Arabic and Tigrinya are \_\_\_\_\_ languages

- A. semitic B. Bantu  
C. Nilotic D. Cushitic

37. Which type of vegetation is found in Central Tanzania?

- A. Miombo woodlands  
B. Mangrove forest  
C. Lowland forest  
D. Savannah grassland

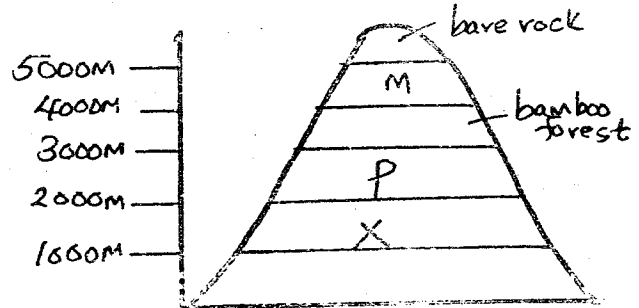
38. Who among the following were the first to visit Eastern Africa?

- A. Italians B. Arabs  
C. British D. Portuguese

39. Limestone is mined in the following areas except:

- A. Bamburi B. Athi River  
C. Sultan Hamud D. Kariandusi

Use the diagram below to answer questions 40 - 43.



40. Name the vegetation marked x

- A. savannah B. rain forest  
C. moss D. moorland

41. Name the vegetation marked p

- A. the rain forest B. Lichens  
C. Bamboo forest D. Moorland

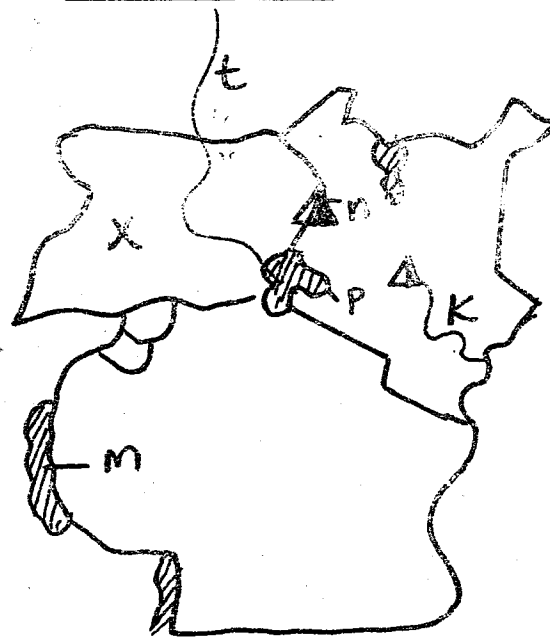
42. The main economic activity in the region marked x is

- A. dairy farming B. crop cultivation  
C. pastoralism D. lumbering

43. This vegetation has been influenced by

- A. longitudes  
B. altitude  
C. nearness to water bodies  
D. latitudes

Use the diagram below which represents the map of Eastern Africa to answer questions 44- 49.



44. The river marked k is known as

- A. R. Nile B. R. Tana  
C. R. Athi D. R. Ruvuma

45. The mountain marked n was formed through the process of \_\_\_\_\_  
 A. faulting                      B. down warping  
 C. volcanicity                  D. deposition
46. The lake marked m is called  
 A. L. Malawi                      B. L. Kyoga  
 C. L. Tanganyika                D. L. Victoria
47. The climate around the lake marked p is  
 A. cool and wet                  B. hot and wet  
 C. hot and dry                   D. cool and dry
48. The main staple food in the country marked x is \_\_\_\_\_  
 A. maize                          B. beans  
 C. wheat                          D. bananas
49. The capital city of the county marked t is  
 A. Khartoum                      B. Addis Ababa  
 C. Juba                            D. Elwak
50. Which weather instrument is wrongly matched with its use  
 A. Anemometer - direction of wind  
 B. Barometer - Air pressure  
 C. Hygrometer - Humidity  
 D. Sunshine recorder - Cloud cover
51. The **main** species of trees found in the Savanah region are \_\_\_\_\_  
 A. camphor and obeeche  
 B. Elgon teak and cactus  
 C. Acacia annd baobab  
 D. spruce and cypress
52. Which one of the following is not a modern fish preservation method?  
 A. Canning                      B. Freezing  
 C. Smoking                      D. Filleting
53. What is the main tourist attraction along the coastal region of Kenya?  
 A. People's culture  
 B. Wildlife  
 C. Magrove forests  
 D. Warm Sandy beaches
54. Which party led Kenya to its full independence in 1964  
 A. KADU                          B. JUBILEE  
 C. NASA                          D. KANU
55. Which one of the following is not an arm of government?  
 A. Executive                      B. Cabinet  
 C. Legislature                    D. Judiciary
56. Which one of the following is not a symbol of national unity?  
 A. Religion                        B. National anthem  
 C. Coat of arms                   D. National flag
57. The first christian mission station was built

by Dr. Ludwig Krapf at \_\_\_\_\_  
 A. Rabai                          B. Maseno  
 C. Kikuyu                        D. Nairobi

58. Which one of the following is not a problem facing industries in Eastern Africa  
 A. shortage of skilled labour  
 B. high cost of production because of the high cost of fuel  
 C. Competetion from cheap, industrial imports  
 D. Low population growth
59. Who is the head of the judiciary in Kenya  
 A. President                      B. Attorney General  
 C. Chief justice                  D. Deputy president
60. Who is the head of judiciary in Kenya?  
 A. Attorney                        B. President  
 C. Speaker                        D. Chief Justice

### STD 6 C. R. E

61. God created everything in \_\_\_\_\_ days  
 A. five    B. six    C. seven    D. three
62. Who prayed in the house of the lord at Shiloh to get a child?  
 A. Hannah                        B. Samuel  
 C. Peninah                        D. Eli
63. Which of the following can be as a result of bad effects of weather?  
 A. People living peacefully  
 B. People having enough to eat  
 C. Displacement of people from their homes  
 D. People planting crops in good time
64. With seven loaves and few small fish, Jesus fed \_\_\_\_\_ people  
 A. 5000    B. 4000    C. 3000    D. 2000
65. The promised land of Israelites was  
 A. Egypt                          B. Canaan  
 C. Samaria                        D. Jordan
66. According to Galatians 6: 2, Saint Paul taught Christians to help carry one another's \_\_\_\_\_  
 A. burdens                        B. riches  
 C. sickness                        D. debts
67. Jesus cleansed the temple when He found traders changing money and  
 A. selling cows                  B. selling horses  
 C. selling colts                  D. selling peglons
68. Moses was given the ten commandments on Mount \_\_\_\_\_  
 A. Sinai                            B. Olives  
 C. Moriah                        D. Gethsemane

69. Which punishment was given to Eve after disobeying God at the garden of Eden?  
 A. To crawl all her life  
 B. To rule over man  
 C. To bear children with pain  
 D. To toil to make the earth produce
70. The name Jesus means  
 A. annointed one      B. teacher  
 C. saviour              D. the great healer
71. Jesus went to pray with his disciples at  
 A. Mt. Olives            B. Mt. Nebo  
 C. Mt. Calvary         D. Mt. Sinai
72. Who among the following was afraid of baptising Jesus?  
 A. Pilate  
 B. Peter  
 C. John the Baptist  
 D. Caiphas
73. A good church leader should have all the following characteristics except one. Which one is it?  
 A. They should be gentle  
 B. They should love money  
 C. They should not be violent  
 D. They should be mature in faith
74. We care for our environment by  
 A. cutting down trees  
 B. killing all wild animals  
 C. planting trees in deserts  
 D. setting more industries
75. People who are selfish are always  
 A. loving                      B. patient  
 C. kind                         D. self centred
- The third king of Israel was called  
 A. Saul                         B. Joshua  
 C. Solomon                  D. David
77. A good leader should be  
 A. rough  
 B. gentle and peaceful  
 C. rude  
 D. dishonest
78. Ruth chose to go with Noah back to Bethlehem while Orphah went to  
 A. Hebron B. Moab  
 C. Antioch D. Canaan
79. From the story of Noah and the great floods christians learn to  
 A. obey God's word  
 B. be good carpenters  
 C. stay away from floods  
 D. stay together as a family
80. Moses went to Midian after  
 A. marrying Zipporah  
 B. fighting with Pharaoh  
 C. killing an Egyptian  
 D. fighting with Aaron
81. Who killed Naboth?  
 A. Saul B. Ahab C. David D. Jezebel
82. When the disciples were filled with the Holy spirit on the day of pentecost  
 A. they drank wine  
 B. they ran away  
 C. they developed fear  
 D. they spoke in diffrent languages
83. Golgotha means  
 A. place of Jesus  
 B. place of skull  
 C. place of happiness  
 D. place of crucification
84. The son of Jacob, who was loved more than his brothers was sold to merchants who took him to  
 A. Syria                         B. Midian  
 C. Egypt                        D. Samaria
85. Which of these values enabled David to fight Goliath the Philistine soldier?  
 A. Patience                    B. Courage  
 C. Pride                         D. Kindness
86. Jesus healed the Roman's officers servant at Capernaum due to  
 A. the faith of the servant  
 B. the position of the Roman officer in the government  
 C. the faith of the Roman officer  
 D. the wealth of the Roman officer
87. The first mission centre in Kenya was established at \_\_\_\_\_  
 A. Maseno                      B. Nairobi  
 C. Rabai                         D. Kitui
88. The African name for God among the Luo was  
 A. Were                         B. Asis  
 C. Mulungu                    D. Nyasaye
89. The last book in the old testament is known as  
 A. Malachi                      B. Revalation  
 C. Jude                         D. Mathew
90. Schools where the disabled learn are known as  
 A. secondary schools  
 B. special schools  
 C. tertiary schools  
 D. primary schools