

Name: *Marking Guide* Class: Adm.No.
School: Date:
Sign:.....

233/1
CHEMISTRY
Paper 1
JUNE/JULY 2021
Time: 2 hours

MOKASA JOINT EXAMINATION - 2021

Kenya Certificate to Secondary Education

CHEMISTRY PAPER 1

TIME: 2 HOURS

INSTRUCTIONS TO CANDIDATES

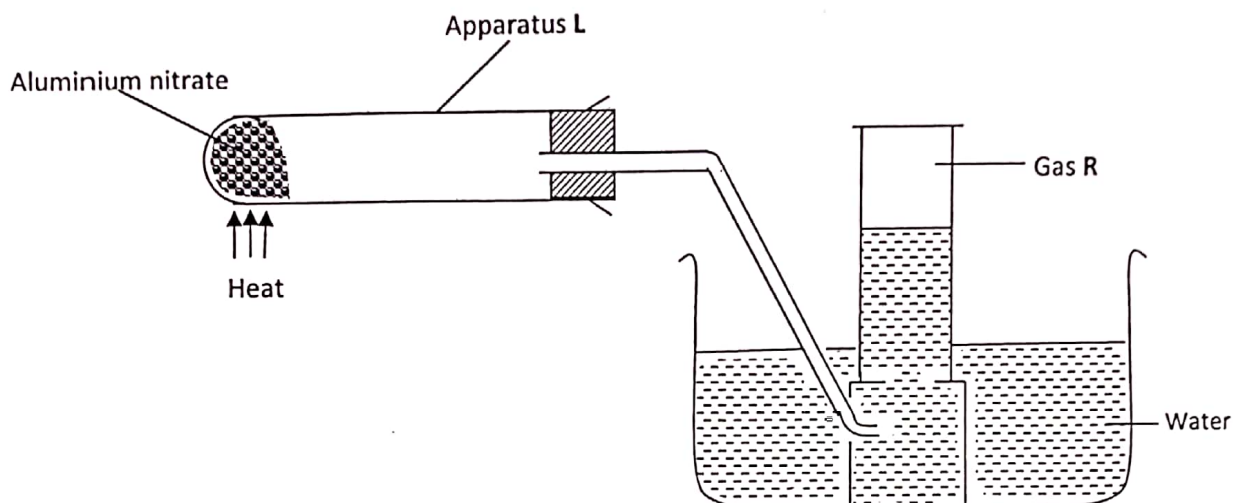
- Write your name, admission number, date and school in the spaces provided.
- Answer all the questions in the spaces provided.
- All working must be clearly shown where necessary.
- Scientific calculators may be used.

FOR EXAMINERS' USE ONLY

Questions	Maximum Score	Candidate's Score
1 - 26	80	

This paper consists of 11 printed pages. Candidates are advised to check and to make sure all pages are as indicated and no question is missing.

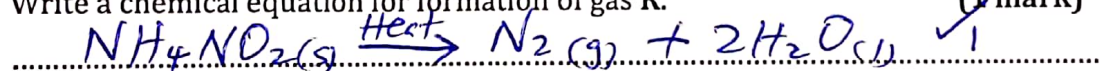
1. Ammonium nitrite was heated as shown below.



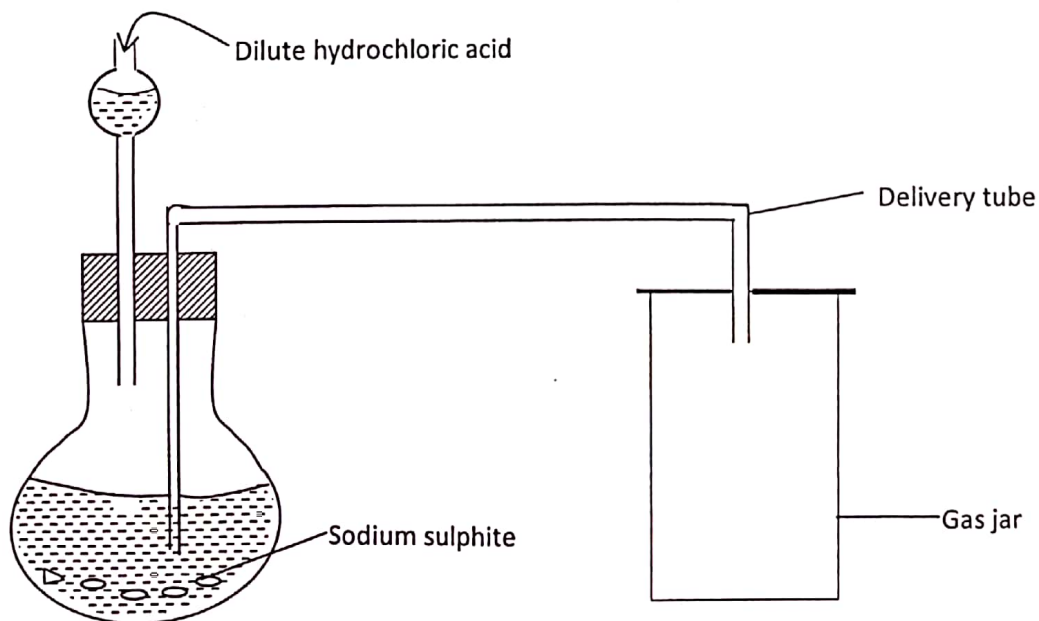
- (i) Give a suitable material that can be used to make apparatus L, explain your answer. (2 marks)

Glass, Glass has high m.p.t hence, can withstand strong heating. Glass is transparent for correct observation.

- (ii) Write a chemical equation for formation of gas R. (1 mark)



2. Dilute hydrochloric acid and sodium sulphite were reacted as shown below.

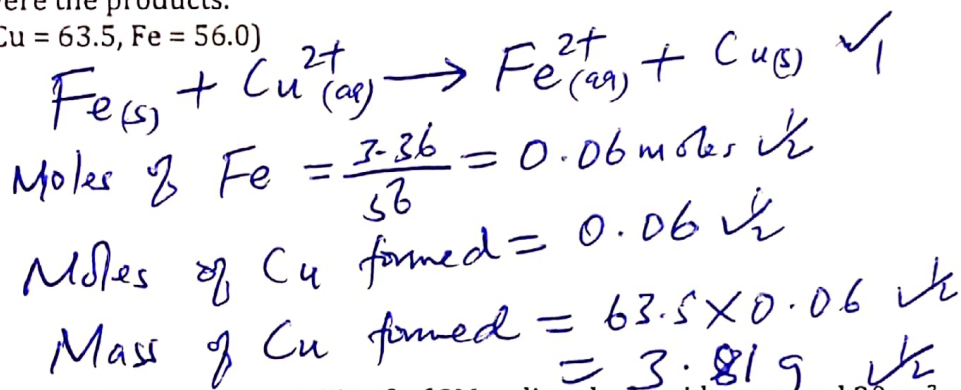


- (i) Write a chemical equation for the reaction taking place in the flask. (1 mark)

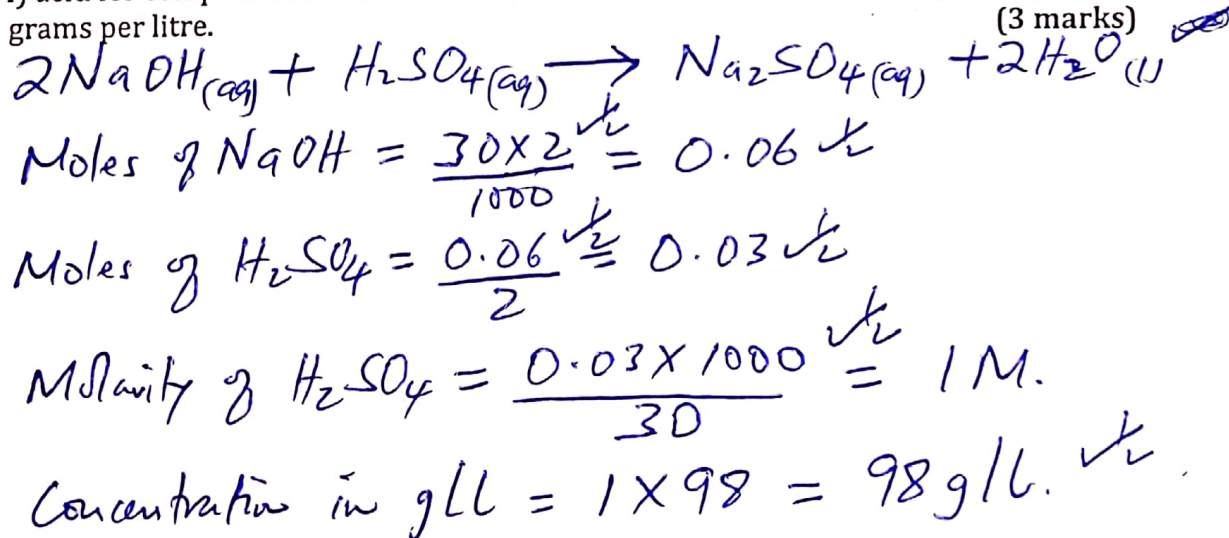
$$\text{Na}_2\text{SO}_3(\text{s}) + 2\text{HCl}(\text{aq}) \rightarrow 2\text{NaCl}(\text{aq}) + \text{SO}_2(\text{g}) + \text{H}_2\text{O}(\text{l}) \checkmark$$
- (ii) State one main laboratory rule that should be observed during the above experiment and give a reason for your choice. (2 marks)
 Poisonous gases should be prepared in the fume chamber; SO_2 produced is poisonous. \checkmark
- (iii) Give two reasons why no gas was collected in gas jar. (2 marks)
 - Thistle funnel was dipped into the reaction mixture. \checkmark
 - Delivery tube entered the solution. \checkmark

3. In an experiment 3.36g of iron filling were added to excess copper (II) sulphate solution. Calculate the mass of copper that was deposited given that Iron (II) sulphate and copper were the products.

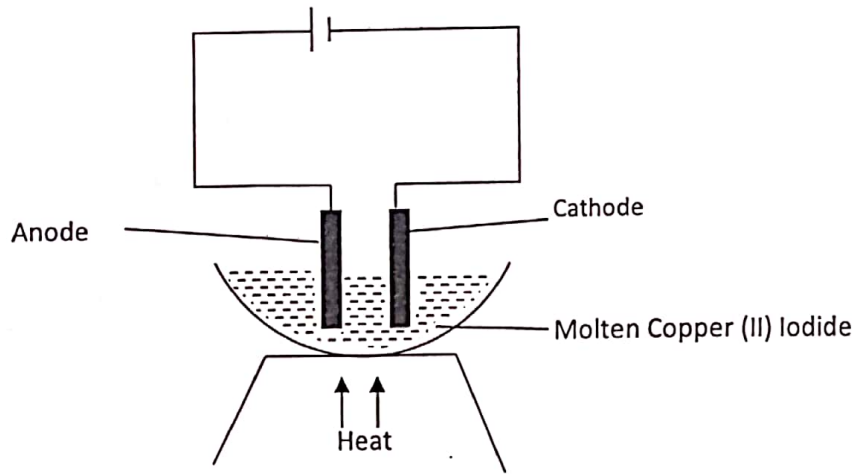
(Cu = 63.5, Fe = 56.0) (3 marks)



4. In a titration experiment 30cm³ of 2M sodium hydroxide required 30cm³ of sulphuric (VI) acid for complete neutralization. Determine the concentration of sulphuric (VI) acid in grams per litre. (3 marks)

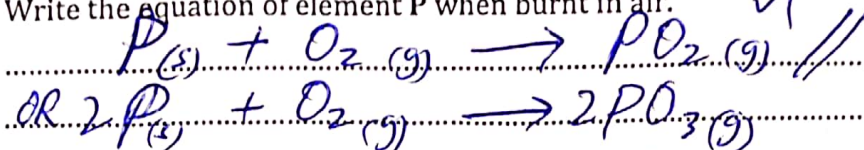


5. Study the diagram below and answer the questions that follow.

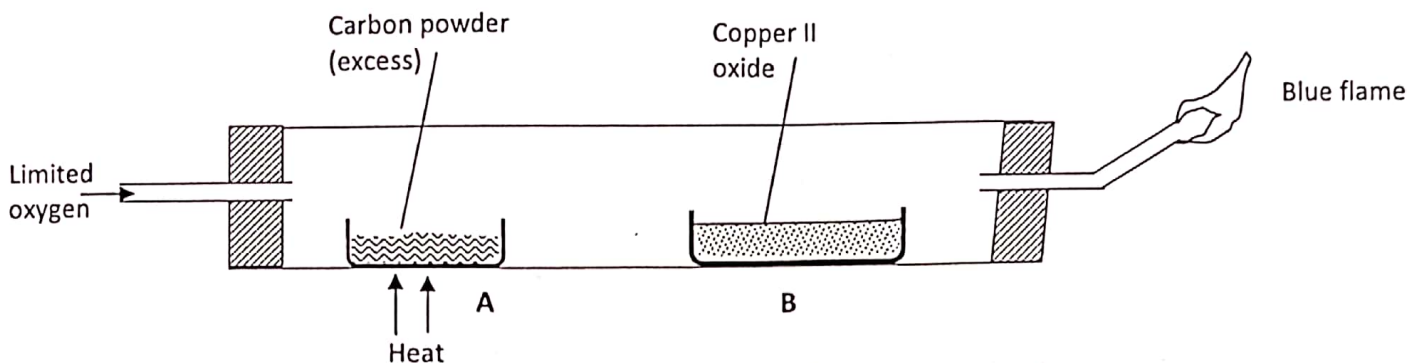


- (i) State the observation made at the cathode. (1 mark)
Brown beads / Brown solid ✓
- (ii) Write the equation taking place at the Anode. (1 mark)
 $2I^{-}(l) \rightarrow I_2(g) + 2e^{-} \checkmark$
- (iii) What material should be used to make the cathode? (1 mark)
Graphite / Platinum ✓
6. (a) Define the term electrolysis. (1 mark)
Decomposition of molten / aqueous substance when electric current is passed through it ✓
- (b) State two applications of electrolysis. (2 marks)
*- Extraction of metals eg K, Na, Mg
 - Purification of metals
 - Electroplating*
7. (a) Write the electron arrangement of element P which has atomic number 16. (1 mark)
2.8.6 ✓
- (b) State the group and period of element P. (1 mark)
*Group VI ✓
 Period 3 ✓*

- (c) Write the equation of element P when burnt in air. (1 mark)



8. Study the diagram below and answer the question that follow.

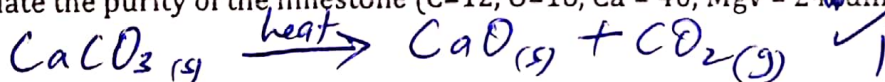


- (a) State and explain observation made ^{at} point A. (2 marks)
Red glow / Yellow glow - Reaction is exothermic
- (b) Explain the observation made out point B. (2 marks)
Black solid remains black - Absence of heat prevented reduction of CuO by CO
- (c) Why was it necessary to burn the gas at the jet? (1 mark)
It's poisonous

9. Give two reasons why carbon (IV) oxide is used at a fire extinguisher. (2 marks)

- It's denser than air
- It does not support combustion

10. To determine the purity of limestone Form 3 students heated 12.5g of limestone in a crucible until they obtained a constant mass. If the volume of CO₂ obtained was 2400. Calculate the purity of the limestone (C=12, O=16, Ca = 40, Mgv = 240dm³). (3 marks)



$$\text{Moles of } CO_2 = \frac{2400}{24000} = 0.1 \checkmark$$

$$\text{Moles of } CaCO_3 = 0.1 \checkmark$$

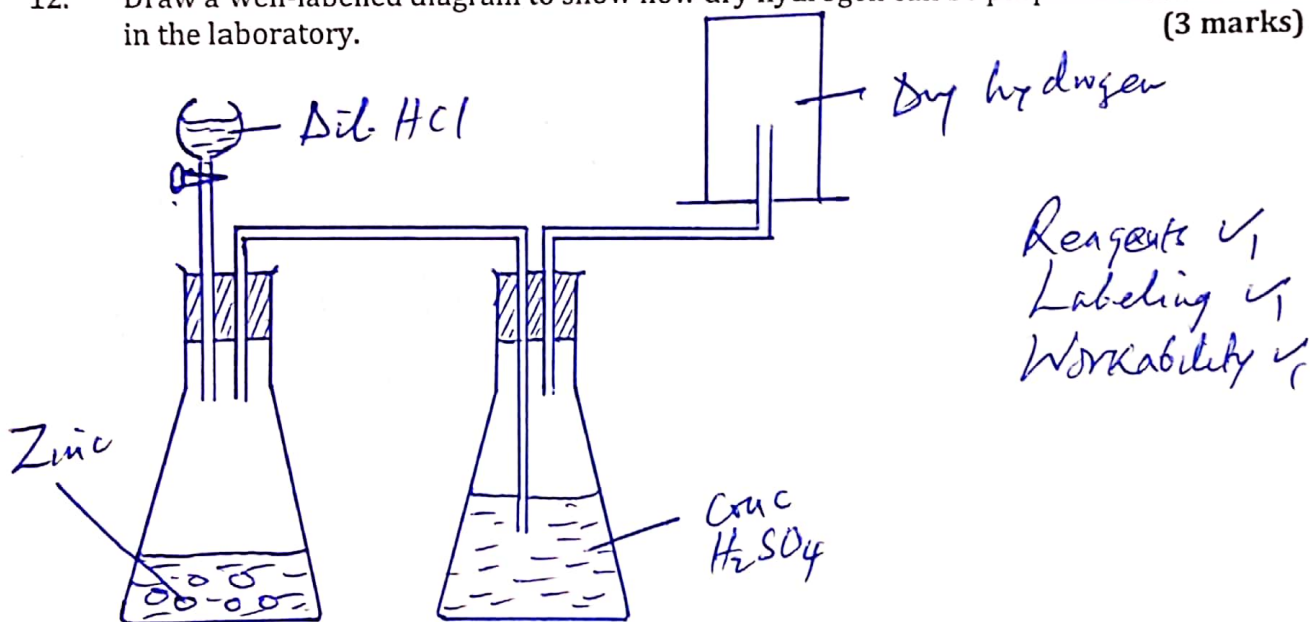
$$\text{Mass of } CaCO_3 = 0.1 \times 100 \checkmark$$

$$\% \text{ purity} = \frac{10}{12.5} \times 100 = 80\% \checkmark$$

11. Determine the relative atomic mass of Neon whose isotopic composition is as follows.

$$\begin{aligned}
 & {}_{10}^{20}\text{Ne} (90.92\%) \quad {}_{10}^{21}\text{Ne} (0.26\%) \quad {}_{10}^{22}\text{Ne} (8.82\%) \quad (3 \text{ marks}) \\
 \text{RAM} &= \frac{(20 \times 90.92) + (21 \times 0.26) + (22 \times 8.82)}{100} \checkmark \\
 &= \frac{1818.4 + 5.46 + 194.04}{100} \checkmark \\
 &= 20.179 \checkmark
 \end{aligned}$$

12. Draw a well-labelled diagram to show how dry hydrogen can be prepared and collected in the laboratory. (3 marks)



13. Give two characteristics of a temporary chemical change. State one example of such reaction. (2 marks)

- Reversible Example; Heating of $\text{CuSO}_4 \cdot 5\text{H}_2\text{O}$
 - New substance formed Heating of $\text{CoCl}_2 \cdot 6\text{H}_2\text{O}$
 - Change in mass
 - Net heat change

14. (a) What is drug abuse? (1 mark)

Use of drug for a purpose other than the one it's intended for // Overdose or underdose of a drug.

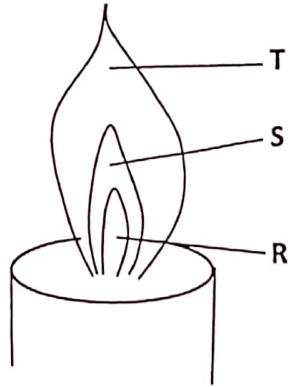
- (b) Name one commonly abused non-medicinal drug. (1 mark)

Cocaine // Miraa // Alcohol

- (c) A doctor prescribed drugs to a patient Amoxil 2x3. How should the patient take the drug? (1 mark)

2 tablets after every 8 hours ✓

15. The figure below shows a flame obtained from a Bunsen burner.



- (a) Name the type of flame. (1 mark)

Non-luminous flame ✓

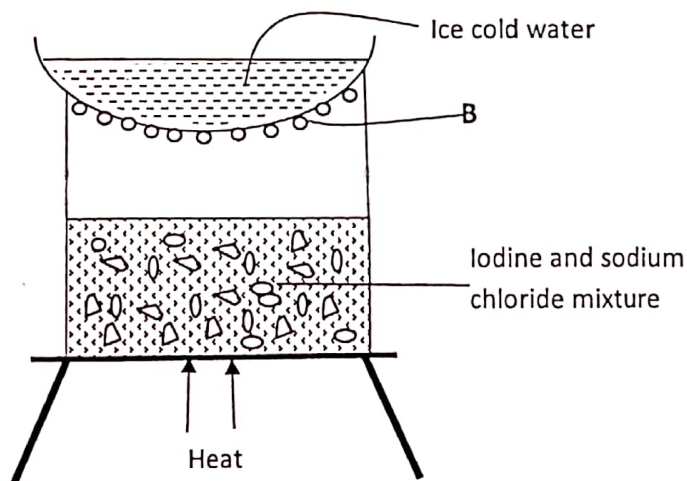
- (b) A matchstick head placed at region R will not ignite. Explain. (1 mark)

Its a region of unburnt gases hence not very hot. ✓

- (c) Name region S. (1 mark)

Green-blue zone ✓

16. The set-up below was used to separate a certain mixture.



- (a) Identify the method of separation shown. (1 mark)

Sublimation. ✓

(b) Identity substance B. (1 mark)

Iodine ✓

(c) Give any other substance when mixed with sodium chloride can be separated as above? (1 mark)

$AlCl_3$ // solid CO_2 // $FeCl_3$ // Benzoic acid ✓
Any 1 x 1

17. Element A with atomic number 12 and B with atomic number 9.

(a) To which chemical family is; (2 marks)

A - Alkaline Earth Metals ✓
B - Halogens ✓

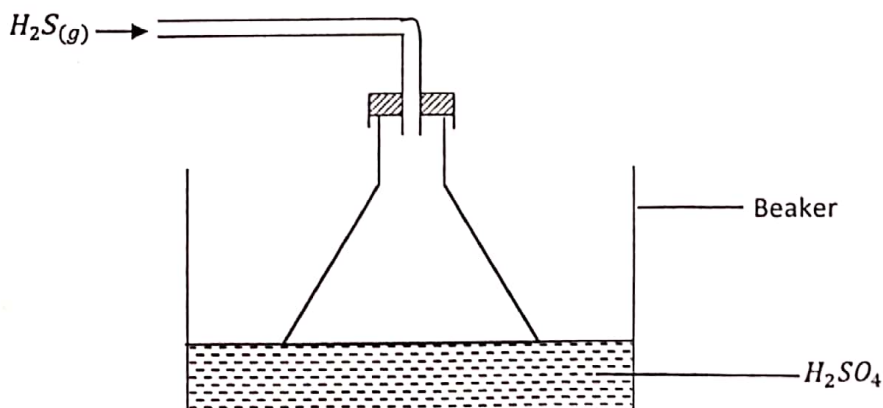
(b) Write the equation for the reaction between A and B. (1 mark)

$A(s) + B_2(g) \rightarrow AB_2(s)$ ✓

18. When chlorine gas is passed over heated iron metal, 26.7g of the product is formed. Calculate the mass of iron which reacted. (Fe = 56, Cl = 35.5) (3 marks)

$2Fe(s) + 3Cl_2(g) \rightarrow 2FeCl_3(s)$ ✓
Moles of $FeCl_3 = \frac{26.7}{162.5} = 0.1643$ ✓
Moles of Fe = 0.1643 ✓
Mass of Fe = 0.1643×56 ✓
= 9.2008g ✓

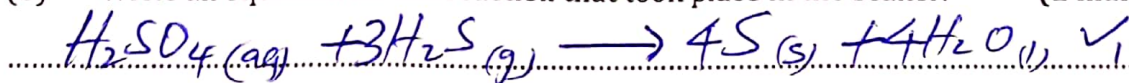
19. Study the diagram below and answer the questions that follow.



(a) Give the observation made in the beaker. (1 mark)

A yellow solid deposited ✓
.....

(b) Write an equation for the reaction that took place in the beaker. (1 mark)



(c) Give one reason why the gas is directed into the beaker using the inverted funnel as above? (1 mark)

- To avoid sucking back of the acid ✓
.....

- To increase S.A for the reaction ✓
.....

20. (a) State Graham's law of diffusion. (1 mark)

Under constant temp and pressure, the rate of diffusion of a gas is inversely proportional to square root of density. ✓
.....

(b) It takes 50 seconds for 200cm³ of carbon (IV) oxide to diffuse through a plug. How long will it take 300cm³ of nitrogen (IV) oxide to diffuse through the same plug under the same conditions of temperature and pressure.

(C = 12, N = 14, O = 16)

300cm³ of CO₂ diffuses in $\frac{300 \times 50}{200} = 75$ sec

$$t_{\text{NO}_2} = t_{\text{CO}_2} \times \sqrt{\frac{\text{MM}_{\text{NO}_2}}{\text{MM}_{\text{CO}_2}}}$$

$$t_{\text{NO}_2} = 75 \times \sqrt{\frac{46}{44}} \checkmark$$

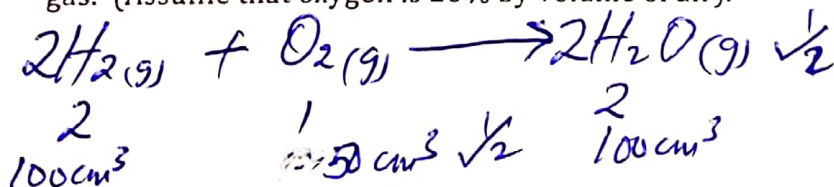
$$= 76.69 \text{ seconds} \checkmark$$

Accept any other method.

21. (a) State Gay Lussac's law. (1 mark)

When gases react, they do so in volumes that bear a simple ratio to one another and to the volumes of the products if gaseous temp and pressure remaining constant. ✓
.....

(b) Calculate the volume of air required to completely react with 100cm³ of hydrogen gas. (Assume that oxygen is 20% by volume of air). (3 marks)

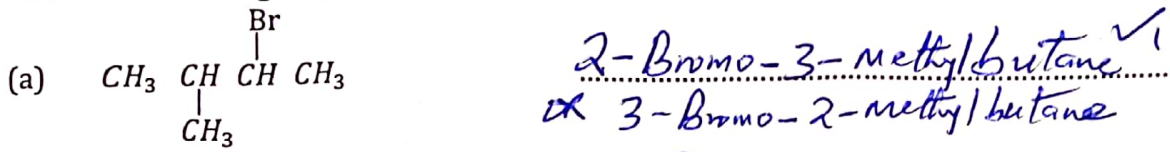


$$\begin{array}{l} 20\% \rightarrow 50\text{cm}^3 \\ 100\% \rightarrow ? \end{array} \quad \left| \quad \begin{array}{l} \frac{100 \times 50}{20} \checkmark \\ 250\text{cm}^3 \checkmark \end{array} \right.$$

$$= 250\text{cm}^3 \checkmark$$

10

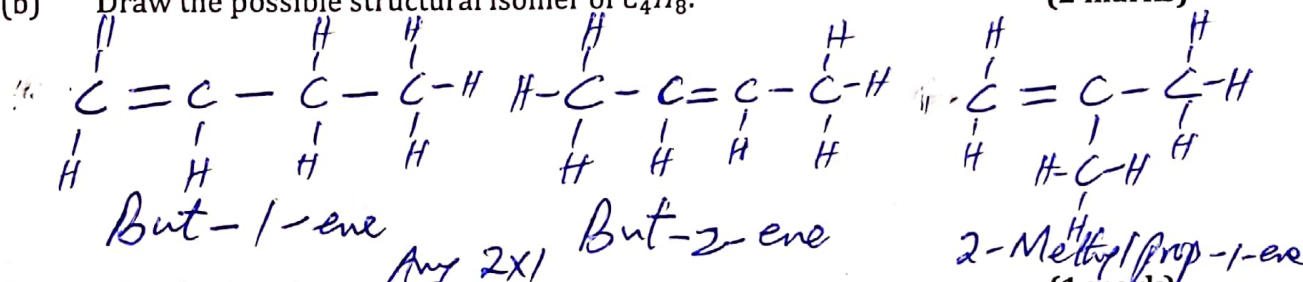
22. Name the following organic substances. (3 marks)



23. (a) Define isomers. (1 mark)

Compounds with same molecular formula but different structural formula. ✓

(b) Draw the possible structural isomer of C_4H_8 . (2 marks)



24. (a) Give the chemical name for rust. (1 mark)

Hydrated iron(III) oxide ✓

(b) Name one condition which speeds up rusting. (1 mark)

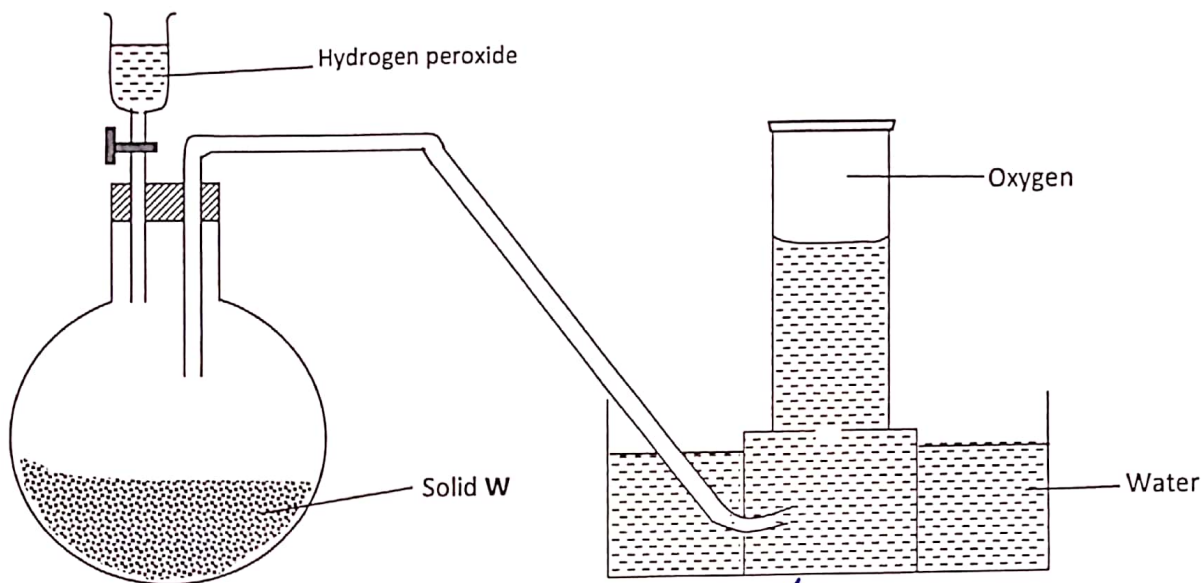
Acidic condition // High temp // Salt condition ✓ Any 1X1

(c) Many iron products are coated with a layer of zinc to protect it from rusting. State two ways in which zinc prevents rusting of iron. (1 mark)

- Cathodic protection ✓
- Galvanisation ✓

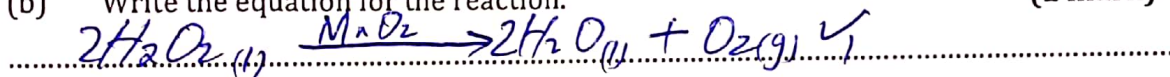
09

25. Study the diagram below for the preparation of oxygen in the laboratory.



(a) Name solid W. Manganese(IV) oxide; Rej formula (1 mark)

(b) Write the equation for the reaction. (1 mark)



(c) What property of oxygen makes it to be collected as above? (1 mark)

Slightly soluble in water / Does not react with water

26. Starting with Barium Oxide describe how Barium chloride can be prepared in the Lab. (2 marks)

- Add excess BaO into HCl(aq) and stir ✓
- Filter ✓ to remove excess BaO as residue
- Heat the filtrate to saturation ✓
- Allow it to cool.
- Pour out the mother liquor ✓
- Dry the crystals between filter papers.

5