



CROWN EXAMINATION TEST

MONITORING LEARNER'S PROGRESS

GRADE 2 - TERM III - YEAR 2021

MATHEMATICS ACTIVITIES


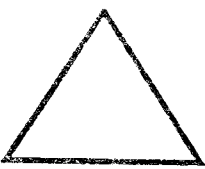


(60 marks)

Name: _____


School: _____


The grid below is to be filled by the teacher after marking the learner's work


Exceeds expectation	Meets expectation	Approaching expectation	below expectation

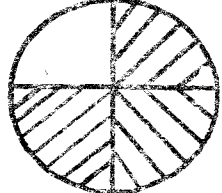
1. Fill in the missing numbers. (5 mks)
 20, _____, 30, 35, _____, 45, _____
 _____, 60, _____
2. Complete the sentences (5 mks)
 - (a) 102 = _____ hundreds
 _____ tens _____ ones
 - (b) 54 = _____ hundreds
 _____ tens _____ ones
 - (c) 9 = _____ hundreds
 _____ tens _____ ones
 - (d) 100 = _____ hundreds
 _____ tens _____ ones
 - (e) 70 = _____ hundreds
 _____ tens _____ ones
3. Write the numbers in symbols. (5 mks)
 - (a) Seventeen - _____
 - (b) Twenty five - _____
 - (c) Forty - _____
 - (d) Eleven - _____
 - (e) Eight - _____
4. Draw lines to divide the shapes into half (4 mks)
 - (a) 
 - (b) 
 - (c) 
 - (d) 

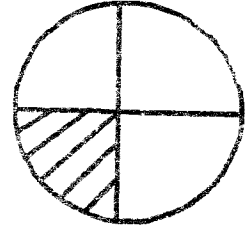
5. Circle the shape that is shaded quarter. (3 mks)

(a) 

(b) 

(c) 

(d) 

(e) 

6. Add. (5 mks)
 - (a)
$$\begin{array}{r} 50 \\ + 30 \\ \hline \end{array}$$
 - (b)
$$\begin{array}{r} 20 \\ + 10 \\ \hline \end{array}$$
 - (c) $4 + 6 =$
 - (d)
$$\begin{array}{r} 3 \\ 1 \\ + 3 \\ \hline \end{array}$$
 - (e) $30 + 9 =$

7. What six ten added to one?
_____ (3 mks)

8. John bought 20 bananas and 5 oranges. How many fruits did he buy? (2 mks)

9. Subtract (5 mks)

(a) $35 - 15 =$

(b) $70 - 40 =$

(c) $\begin{array}{r} 44 \\ - 12 \\ \hline \end{array}$

(d) $\begin{array}{r} 39 \\ - 24 \\ \hline \end{array}$

(e) $14 - 4 =$ _____

10. Multiply (3 mks)

(a) $10 \times 2 =$

(b) $\begin{array}{r} 10 \\ \times 4 \\ \hline \end{array}$

(c) $3 + 3 + 3 = 3 \times \text{_____} = 6$

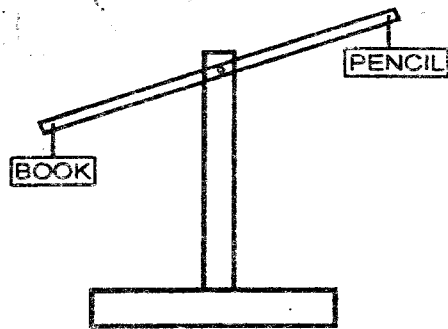
11. Divide (2 mks)

(a) $20 \div 5 =$

(b) $12 \div 4 =$

MEASUREMENT

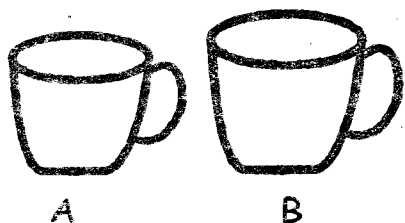
12. Which one is heavier? (1 mrk)



13. Circle the one that is shorter. (1 mrk)

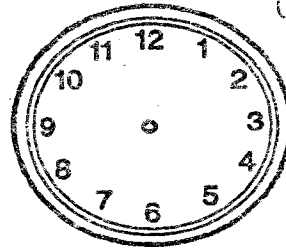


14. Which one holds less? (1 mrk)




15. Which is the last month of the year? _____ (1 mrk)

16. Show the time on the clockface. (1 mrk)



5 O'clock

17. Name the note. (1 mrk)



_____ shilling note.

GEOMETRY

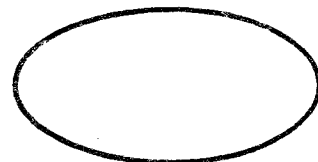
18. Draw the lines. (2 mrk)

(a) Straight line

(b) Curved line

19. Name the shapes. (2 mrk)

(a)



(b)

