

# CROWN EXAMINATION TEST

## MONITORING LEARNER'S PROGRESS

### GRADE 2 - TERM III - YEAR 2021

### INTERGRATED LEARNING AREAS



(50 marks)

Name: \_\_\_\_\_ School: \_\_\_\_\_


The grid below is to be filled by the teacher after marking the learner's work

Exceeds expectation	Meets expectation	Approaching expectation	Below expectation

#### HYGIENE AND NUTRITION ACTIVITIES (20 marks)

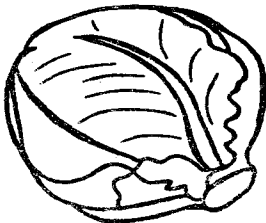
1. Name these food that are good for our health (4 mks)

(a)




\_\_\_\_\_

(b)



\_\_\_\_\_

(c)



\_\_\_\_\_

(d)



\_\_\_\_\_

2. Name two foods you take for breakfast. (2 mks)

\_\_\_\_\_

3. food is cooked in the \_\_\_\_\_ (2 mks)  
(bedroom, kitchen)

4. Name two utencils found in your home. (2 mks)

\_\_\_\_\_

5. Draw these things used to store water. (2 mks)

(a) Bottle

(b) Bucket

6. Name these personal items (3 mks)

(a)



\_\_\_\_\_

(b)



\_\_\_\_\_

(c)




\_\_\_\_\_

7. Name one food that tastes sour.

(1 mks)


8. Write what we get from these animals (2 mks)

(a)



\_\_\_\_\_

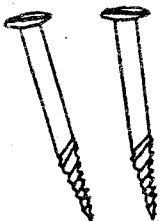
(b)



\_\_\_\_\_

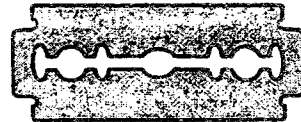
9. Name these things that cause accidents (2 mks)

(a)



\_\_\_\_\_

(b)




\_\_\_\_\_

### ENVIRONMENTAL ACTIVITIES

(20 mks)


1. Name these weather conditions (5 mks)

(a)




\_\_\_\_\_

(b)



\_\_\_\_\_

(c)



\_\_\_\_\_

(d)



\_\_\_\_\_

(e)



\_\_\_\_\_

2. Name two things you use to store water at home. (2 mks)

\_\_\_\_\_

3. Write three types of soil. (2 mks)

\_\_\_\_\_

4. Name two examples of domestic animals (2 mks)

\_\_\_\_\_


5. Name these sources of light. (2 mks)

(a)



\_\_\_\_\_

(b)



\_\_\_\_\_

(c)



\_\_\_\_\_

6. Name two colours of the flag. (2 mks)

\_\_\_\_\_

7. We wear \_\_\_\_\_ clothes when it is cold. (1 mks)

8. Write two ways how you can care for animals. (2 mks)


\_\_\_\_\_

## MOVEMENT AND CREATIVE

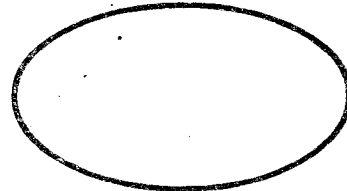
### ACTIVITIES (10 mks)

1. Colour the following shapes using different colours of crayons (3 mks)

(a)




(b)



(c)



2. Draw and colour the National flag. (3 mks)



3. Write the letter. (1 mks)



It is letter \_\_\_\_\_

4. Draw the patterns below (2 mks)



5. Name one thing you can use to make a toy car. \_\_\_\_\_ (1 mks)

6. The mother of Jesus Christ was called \_\_\_\_\_. (1 mks)

7. Draw a fish. (1 mks)

**C.R.E. ACTIVITIES** (10 mks)

1. Name two members of extended family. (2 mks)

\_\_\_\_\_

\_\_\_\_\_

2. Draw these objects created by God. (3 mks)

(a) Sun

\_\_\_\_\_

(b) Star

\_\_\_\_\_


(c) Moon

\_\_\_\_\_

3. Old Testament has \_\_\_\_\_ books (27, 39) (1 mks)

4. Samuel was called \_\_\_\_\_ times. (4, 3) (1 mks)

5. Who built the ark? \_\_\_\_\_ times (Noah, Moses) (1 mks)



**I.R.E. ACTIVITIES** (10 mks)

1. Which prophet if Allah was given Zabur? \_\_\_\_\_

(1 mks)

2. IQRA means \_\_\_\_\_. (1 mks)


3. Write the number of rahaat in the following. (3 mks)

(a) Dhuhr \_\_\_\_\_

(b) Maghrib \_\_\_\_\_

(c) Asr \_\_\_\_\_

4. Draw an elephant (2 mks)



5. Write the letters below in Arabic. Khaa \_\_\_\_\_ (1 mks)

6. There are \_\_\_\_\_ pillars of Islam. (1 mks)

7. What was the name of the grandfather of prophet Muhammad (SAW) (1 mks)

\_\_\_\_\_