



COMPETENCY BASED CURRICULUM MONITORING LEARNER'S PROGRESS GRADE 2 – 007

MATHEMATICS ACTIVITIES

Name _____

Learner's Number

Gender Boy Girl

School Name _____

TEACHER'S SCORING GUIDE ASSESSMENT RUBRICS

| Exceeds expectation | Meets expectation | Approaching expectation | Below expectation |
|---------------------|-------------------|-------------------------|-------------------|
| | | | |

Write the missing number

1. 17, 19, 21, _____, 25
49, 47, _____, 43, 41

Fill in the gaps using place value.

2. 89 = _____ hundreds _____ tens
_____ ones
3. 42 = _____ tens _____ ones

Write in symbols or words.

4. 14 _____
5. _____ twelve
6. 8 _____

Add:-

7. $49 + 7 =$ _____

8.
$$\begin{array}{r} 72 \\ + 9 \\ \hline \end{array}$$

9. Katama had 58 mangoes. He bought 26 more mangoes. How many mangoes does he have altogether?

Write the missing number

10. $69 - \square = 64$
11. $92 - 7 = \square$

Multiply

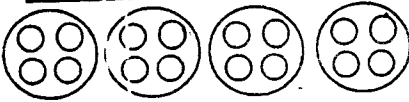
12. $4 \times 8 = \square$
13. 12 shared equally among 4 is _____

14. How many days are there in the month of March? _____
15. **Complete the number family**

$9 - 4 = \square$ $9 - 5 = \square$

16. James had 25 sweets. He gave his sister 9 sweets. How many sweets was he left with?

Fill in the gaps.

17.  = _____

4 x 4 = _____

18.

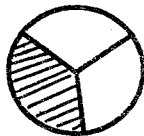


How many five shilling coin are there? _____

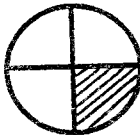
19. Which of the following shows a quarter? _____



A




B

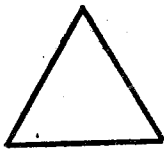


C


20. Which is an oval shape? _____



A




B



C

Write need or want.

21.



Television _____


22.




House _____

23. Which is the last month of the year? _____ (January, December)

Write (shorter than) or (longer than).



A




B

24. A is _____ B

25. B is _____ A

26. What is the time?



It is _____ o'clock

27.



bottle



tin

How many bottles will fill the tin?

Complete the patterns.

28.