



CROWN EXAMINATION TEST

MONITORING LEARNER'S PROGRESS

GRADE 1 - TERM III - YEAR 2021

MATHEMATICS ACTIVITIES (50 marks)

Name: _____ School: _____




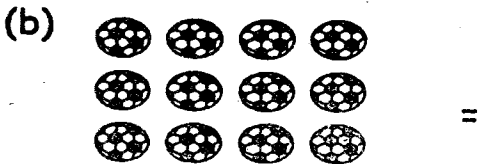

The grid below is to be filled by the teacher after marking the learner's work

Exceeds expectation	Meets expectation	Approaching expectation	below expectation

1. Match the numbers with their names. (5 mks)

- | | |
|--------|--------------|
| (a) 11 | Fiteen |
| (b) 20 | Twenty two |
| (c) 15 | eleven |
| (d) 22 | Thirty three |
| (e) 33 | Twenty |

2. Count and write in words. (5 mks)



3. Fill in the missing numbers. (5 mks)

6, _____, 10, 12, _____

16, _____, 20, _____, 24, _____

4. Complete the place value. (5 mks)

- (a) 12 = _____ tens _____ ones
 (b) 9 = _____ tens _____ ones
 (c) 44 = _____ tens _____ ones
 (d) 31 = _____ tens _____ ones
 (e) 60 = _____ tens _____ ones

5. Add: (5 mks)

(a) $5 + 3 =$

(b) $4 + 1 =$

(c) $6 + 5 =$

(d)
$$\begin{array}{r} 50 \\ + 20 \\ \hline \end{array}$$

(e)
$$\begin{array}{r} 74 \\ + 4 \\ \hline \end{array}$$

6. Take away. (5 mks)

(a) $9 - 3 =$

(b) $5 - 2 =$

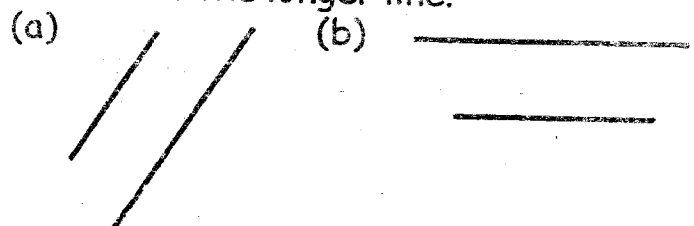
(c)
$$\begin{array}{r} 40 \\ - 20 \\ \hline \end{array}$$

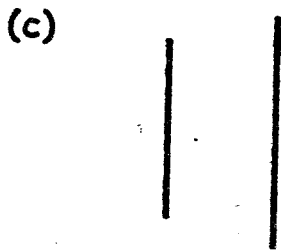
(d)
$$\begin{array}{r} 20 \\ - 20 \\ \hline \end{array}$$

(e)
$$\begin{array}{r} 50 \\ - 40 \\ \hline \end{array}$$

MEASUREMENT

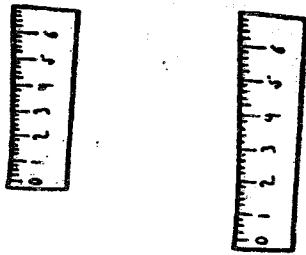
7. Circle the longer line.



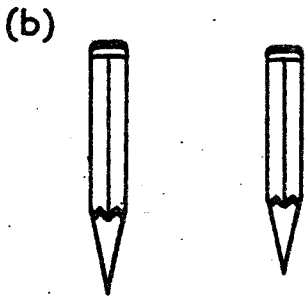


8. Write longer than, smaller than or same as. (3 mks)

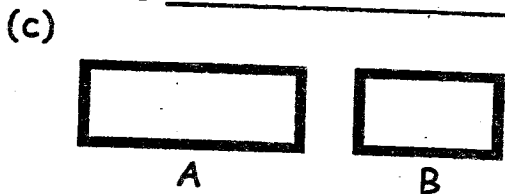
(a) A B



A is _____ B


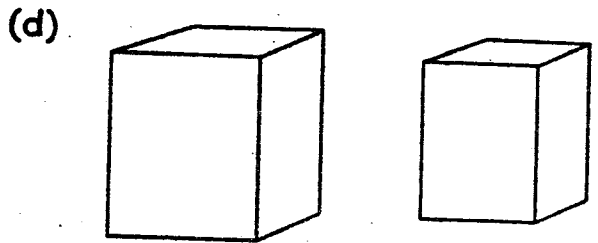
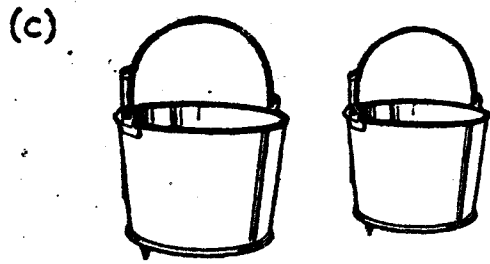



A B
A is _____ B



A is _____ B

9. Colour the one that holds more (5 mks)



10. Fill in the blank spaces. (5 mks)

January, _____
 March, _____
 April, _____
 June, _____
 August, _____
 October, _____
 December, _____

11. Name the shapes. (4 mks)

