

COMPETENCY BASED CURRICULUM MONITORING LEARNER'S PROGRESS GRADE 1 – 007

MATHEMATICS ACTIVITIES

Name _____

Learner's Number

Gender Boy Girl

School Name _____

TEACHER'S SCORING GUIDE ASSESSMENT RUBRICS

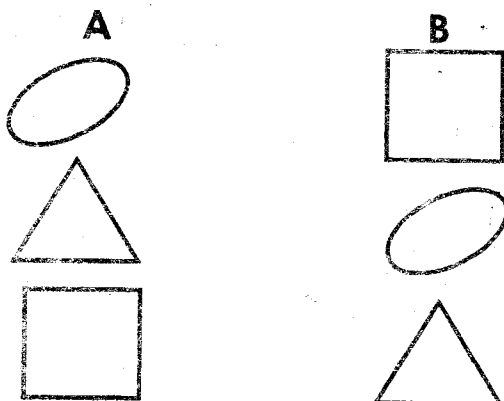
Exceeds expectation	Meets expectation	Approaching expectation	Below expectation

Count and write.

1. + = _____

2. + = _____

3. Match these shapes



Write the numbers that come next.

4. 7, 8, _____, _____, _____

5. 14, 15, _____, _____, _____

6. Which is a straight line?



How many tens and ones.

7. 36 is _____ tens and _____ ones.

8. 75 is _____ tens and _____ ones.

9. Which shape is rectangle? _____



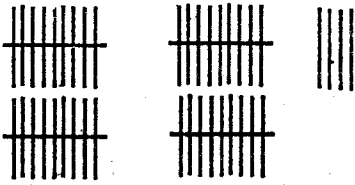
Write in words.

12. 8 _____

13. 7 _____

14. 2 weeks = _____ days.

Place value.

15.  _____ tens _____ ones = _____

16. Which line is longer? _____

_____ A

_____ B

17.
$$\begin{array}{r} 5 \\ + 2 \\ \hline 1 \\ \hline \end{array}$$

19.
$$\begin{array}{r} 22 \\ + 11 \\ \hline \\ \hline \end{array}$$

Fill in the missing numbers.

18. 21, _____, 23, _____, _____
26, _____, 28, _____, 30

Subtract:-


19.
$$\begin{array}{r} 6 \\ - 3 \\ \hline \\ \hline \end{array}$$

22.
$$\begin{array}{r} 8 \\ - 7 \\ \hline \\ \hline \end{array}$$

20.
$$\begin{array}{r} 60 \\ - 20 \\ \hline \\ \hline \end{array}$$

24.
$$\begin{array}{r} 80 \\ - 70 \\ \hline \\ \hline \end{array}$$

21. Which holds more water? _____



22. I have _____ toes.

23. Complete the patterns.




24.



25. Which is heavier? _____

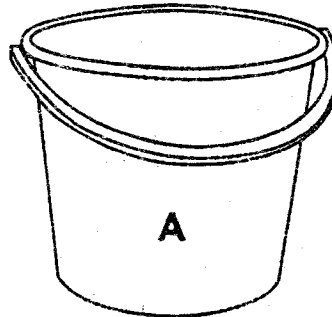


pencil

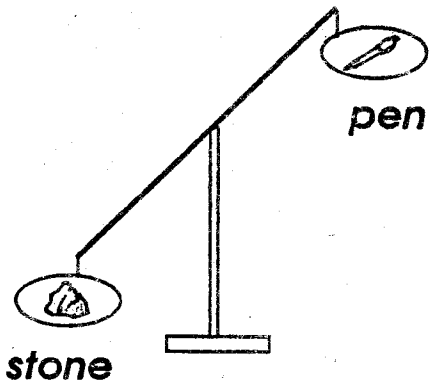


chair _____

26. Which holds less water? _____



27. Which one is heavier? _____



stone

pen