



TISMAR EARLY YEARS' ASSESSEMENT

PRE-PRIMARY (PP2) - TERM 3 - 2021

NUMBER WORK ACTIVITIES

NAME: _____


SCHOOL: _____

1. Match numbers in words

6	tow
10	three
7	six
3	ten
2	seven

2. Write numbers 15-25

3. Which one is shorter



A



B



A. JL



B. SL

4. What numbers are missing

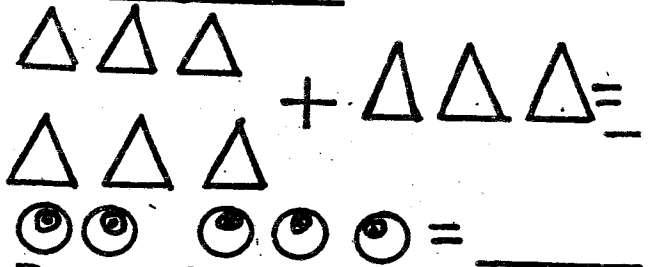
11 12 13 _____

16 _____ 19 _____

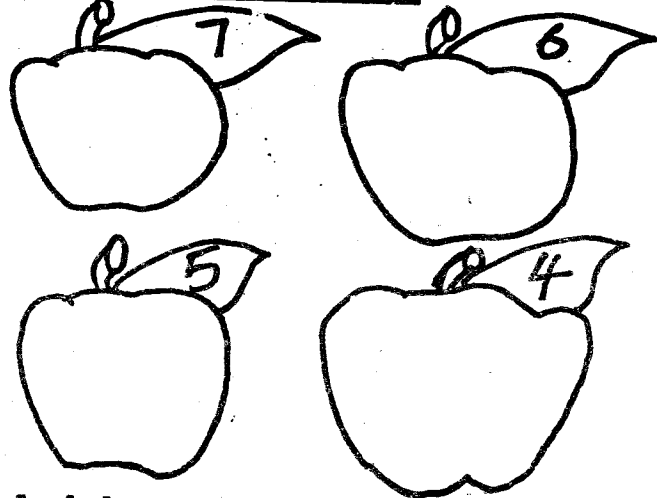
5. Complete pattern



6. Put together



7. Draw the value



8. Add

$$2 + 3 =$$

$$4 + 2 =$$

$$3 + 3 =$$

9. Name the shapes

